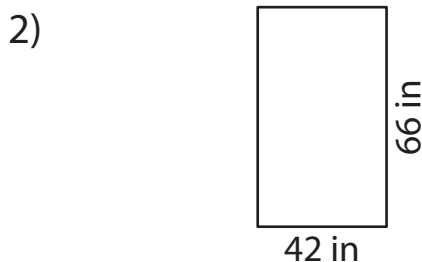
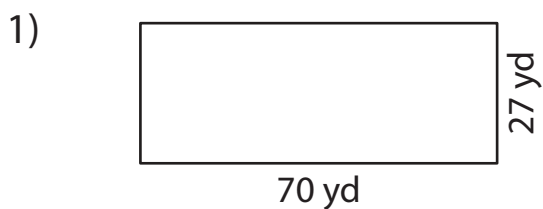


2-Digit by 2-Digit Multiplication

Complete the multiplication sentence to find the area.



Area = Length \times Width

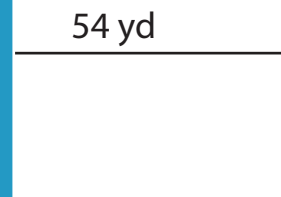
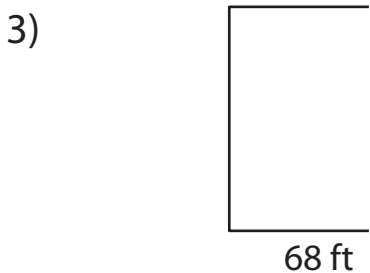
Area = Length \times Width

Area = _____ \times _____

_____ \times _____

Area = _____

_____ in^2



Area = _____ \times _____

_____ \times _____

Area = _____

_____ yd^2

PREVIEW

Gain complete access to the largest collection of worksheets in all subjects!

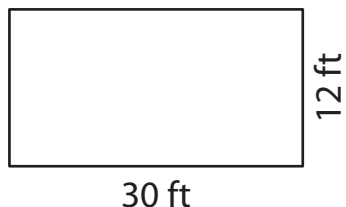
Members, please log in to download this worksheet.

Not a member? Please sign up to gain complete access.

www.mathworksheets4kids.com

5) Flex in Peace, a yoga studio, is 30 ft long and 12 ft wide. What is the area of the studio?

_____ long. What is the area



Area = _____ \times _____

The area of the studio is _____.