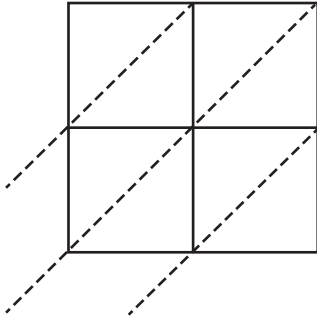


Name : _____

2-Digit by 2-Digit Multiplication

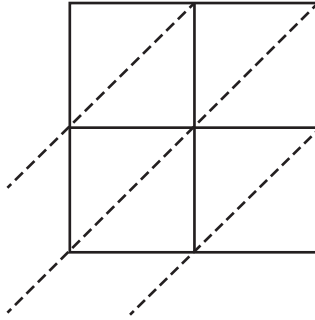
Use lattice multiplication method to find the product in each problem.

1) 20×85



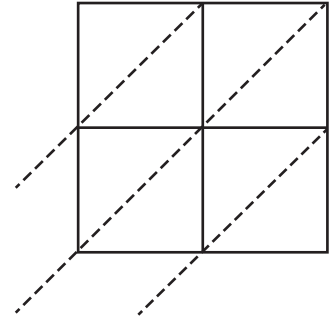
$20 \times 85 =$ _____

2) 33×78



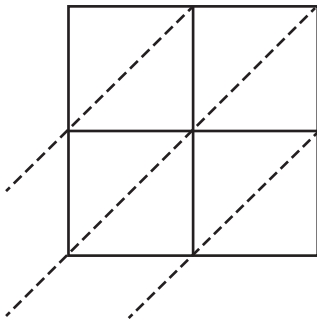
$33 \times 78 =$ _____

3) 52×18



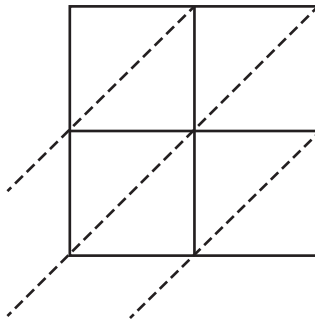
$52 \times 18 =$ _____

4) 73×50



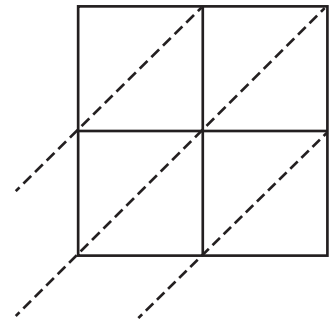
$73 \times 50 =$ _____

5) 80×92



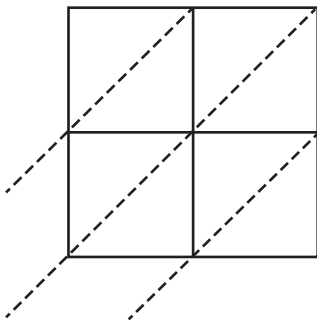
$80 \times 92 =$ _____

6) 93×25



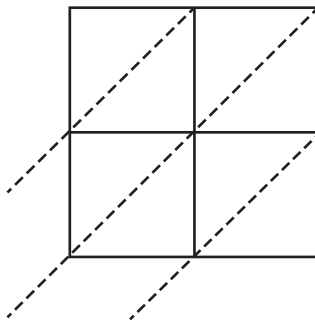
$93 \times 25 =$ _____

7) 12×34



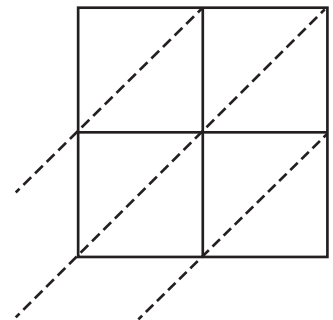
$12 \times 34 =$ _____

8) 61×44



$61 \times 44 =$ _____

9) 46×69



$46 \times 69 =$ _____