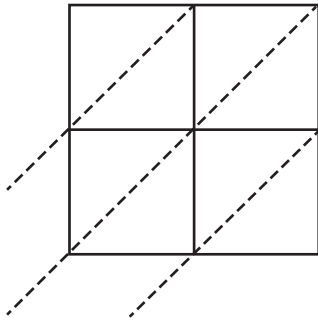


2-Digit by 2-Digit Multiplication

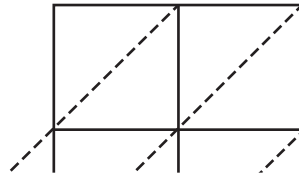
Use lattice multiplication method to find the product in each problem.

1) 50×81

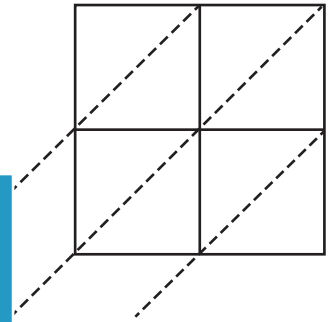


$50 \times 81 =$ _____

2) 89×30

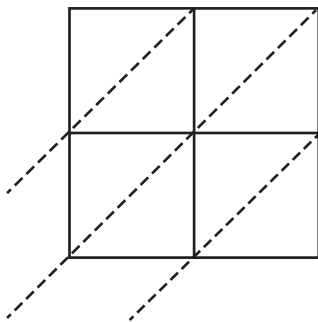


3) 23×90



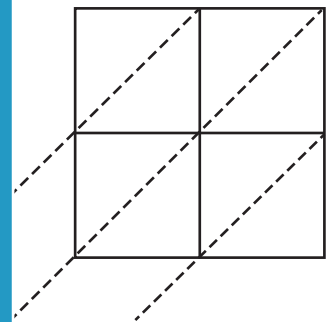
$23 \times 90 =$ _____

4) 62×54



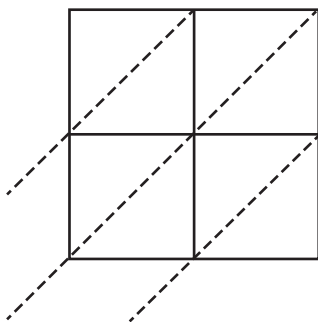
$62 \times 54 =$ _____

5) 34×95

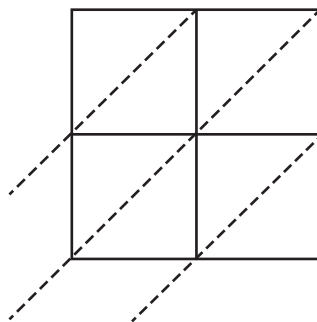


$34 \times 95 =$ _____

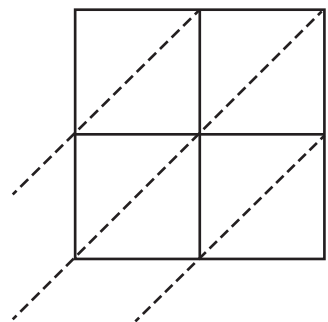
6) 76×45



$76 \times 45 =$ _____



$14 \times 67 =$ _____



$98 \times 17 =$ _____

PREVIEW

Gain complete access to the largest collection of worksheets in all subjects!

Members, please log in to download this worksheet.

Not a member? Please sign up to gain complete access.

www.mathworksheets4kids.com