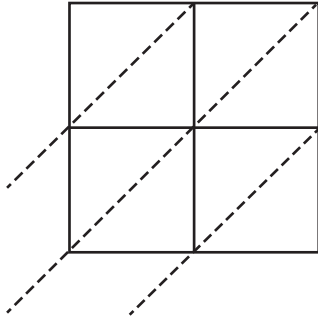


2-Digit by 2-Digit Multiplication

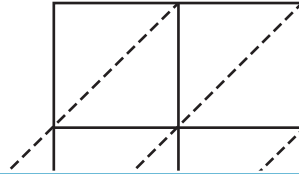
Use lattice multiplication method to find the product in each problem.

1) 55×97

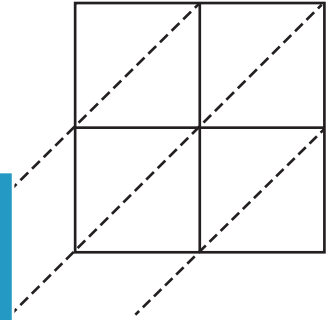


$55 \times 97 =$ _____

2) 63×86

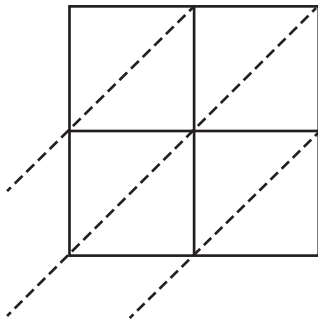


3) 15×23



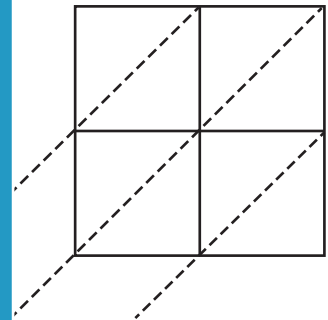
$15 \times 23 =$ _____

4) 46×15



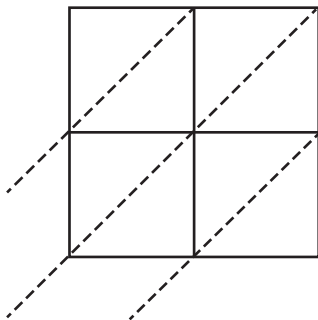
$46 \times 15 =$ _____

5) 34×71

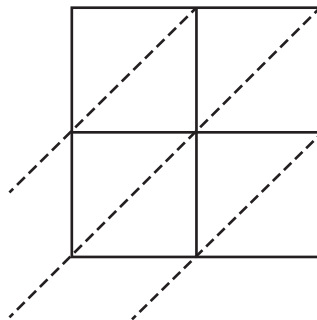


$34 \times 71 =$ _____

6) 95×67

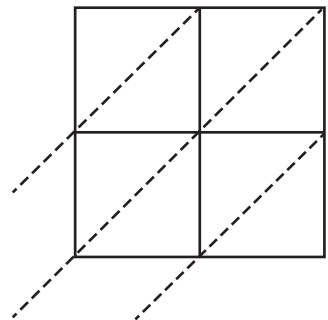


$95 \times 67 =$ _____



$79 \times 35 =$ _____

7) 87×46



$87 \times 46 =$ _____

PREVIEW

Gain complete access to the largest collection of worksheets in all subjects!

Members, please log in to download this worksheet.

Not a member? Please sign up to gain complete access.

www.mathworksheets4kids.com