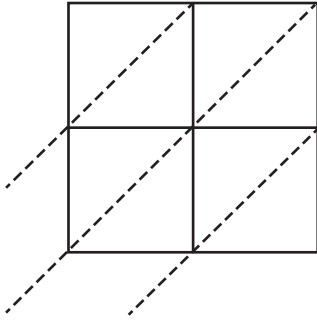


2-Digit by 2-Digit Multiplication

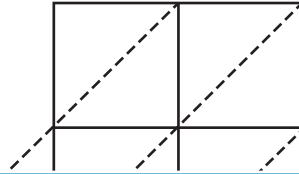
Use lattice multiplication method to find the product in each problem.

1) 76×42

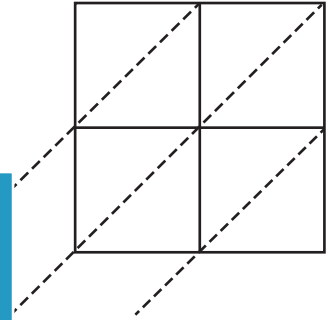


$76 \times 42 =$ _____

2) 27×69

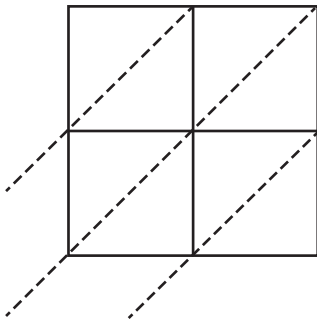


3) 83×29



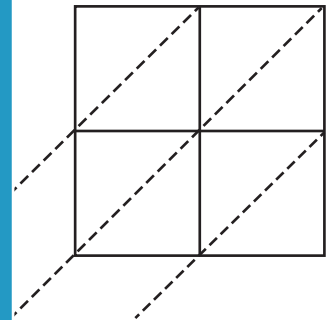
$83 \times 29 =$ _____

4) 62×11



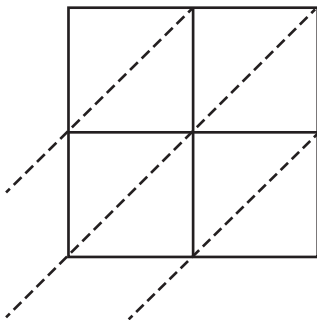
$62 \times 11 =$ _____

41×92

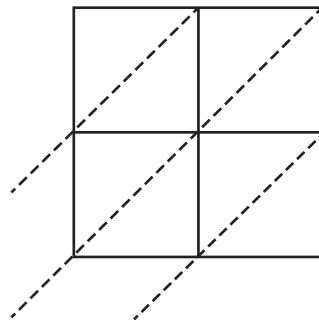


$41 \times 92 =$ _____

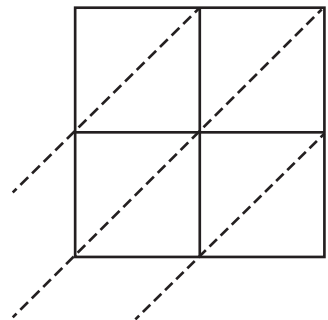
7) 54×81



$54 \times 81 =$ _____



$91 \times 30 =$ _____



$17 \times 58 =$ _____

PREVIEW

Gain complete access to the largest collection of worksheets in all subjects!

Members, please log in to download this worksheet.

Not a member? Please sign up to gain complete access.

www.mathworksheets4kids.com