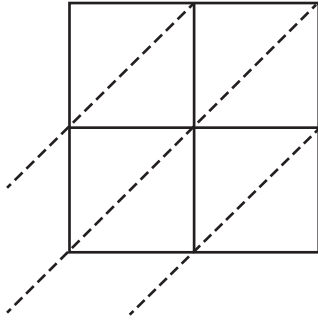


## 2-Digit by 2-Digit Multiplication

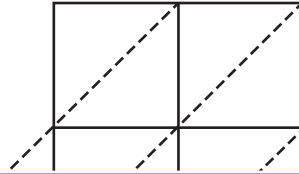
Use lattice multiplication method to find the product in each problem.

1)  $68 \times 29$

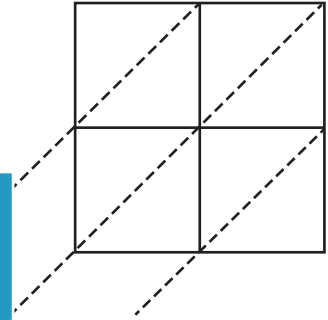


$68 \times 29 =$  \_\_\_\_\_

2)  $79 \times 53$

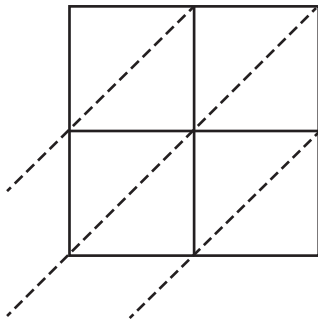


3)  $94 \times 36$



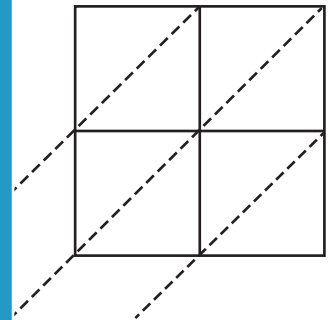
$94 \times 36 =$  \_\_\_\_\_

4)  $45 \times 68$



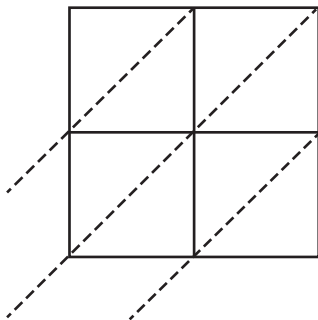
$45 \times 68 =$  \_\_\_\_\_

5)  $20 \times 86$

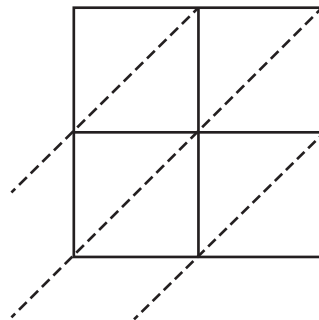


$20 \times 86 =$  \_\_\_\_\_

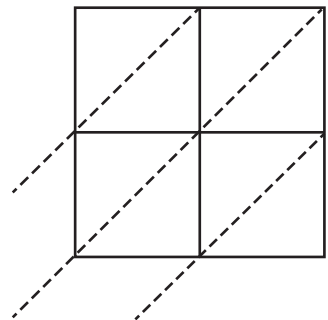
6)  $36 \times 24$



$36 \times 24 =$  \_\_\_\_\_



$87 \times 10 =$  \_\_\_\_\_



$54 \times 49 =$  \_\_\_\_\_

# PREVIEW

Gain complete access to the largest collection of worksheets in all subjects!

Members, please log in to download this worksheet.

Not a member? Please sign up to gain complete access.

[www.mathworksheets4kids.com](http://www.mathworksheets4kids.com)