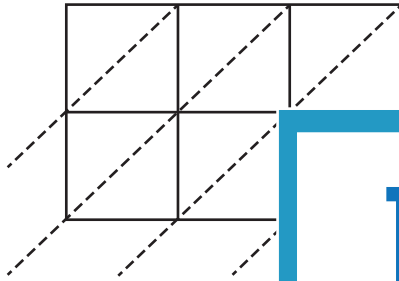


3-Digit by 2-Digit Multiplication

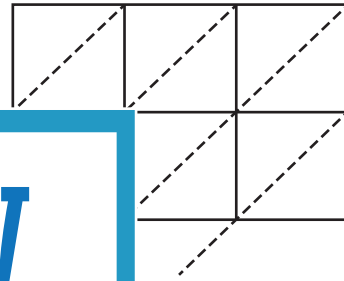
Use lattice multiplication method to find the product in each problem.

1) 950×45



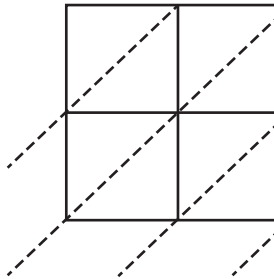
$950 \times 45 = \underline{\hspace{2cm}}$

2) 159×83

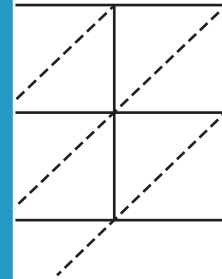


$= \underline{\hspace{2cm}}$

3) 836×62

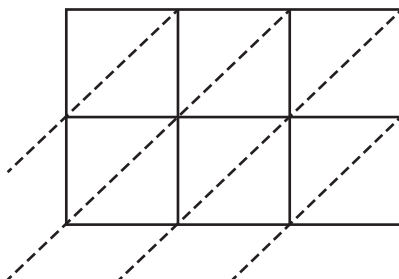


$836 \times 62 = \underline{\hspace{2cm}}$



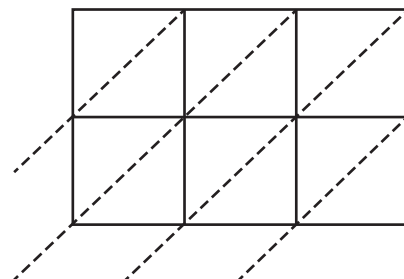
$= \underline{\hspace{2cm}}$

5) 719×18



$719 \times 18 = \underline{\hspace{2cm}}$

6) 271×79



$271 \times 79 = \underline{\hspace{2cm}}$

PREVIEW

Gain complete access to the largest
collection of worksheets in all subjects!

Members, please
log in to
download this
worksheet.

Not a member?
Please sign up to
gain complete
access.

www.mathworksheets4kids.com