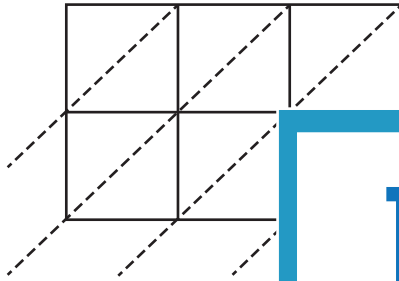


3-Digit by 2-Digit Multiplication

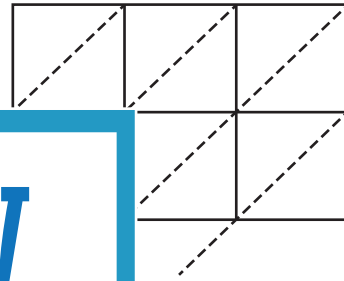
Use lattice multiplication method to find the product in each problem.

1) 175×37



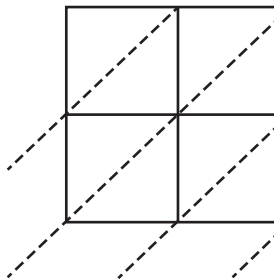
$175 \times 37 = \underline{\hspace{2cm}}$

2) 498×61

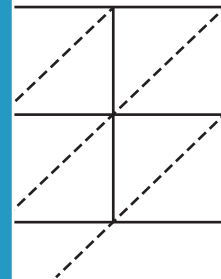


$= \underline{\hspace{2cm}}$

3) 782×24

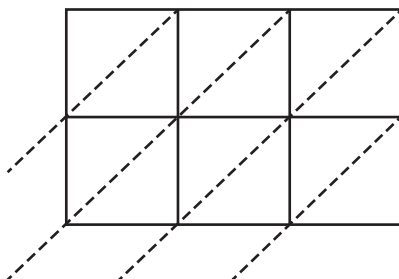


$782 \times 24 = \underline{\hspace{2cm}}$



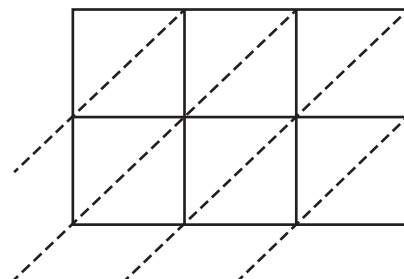
$= \underline{\hspace{2cm}}$

5) 823×40



$823 \times 40 = \underline{\hspace{2cm}}$

6) 381×92



$381 \times 92 = \underline{\hspace{2cm}}$

PREVIEW

Gain complete access to the largest
collection of worksheets in all subjects!

Members, please
log in to
download this
worksheet.

Not a member?
Please sign up to
gain complete
access.

www.mathworksheets4kids.com