


## Multiplication Using Pictures

Sheet 2

1)



How many cherries will 9 such pastries contain?

\_\_\_\_\_

2)



How many beads will 8 such bracelets have?

\_\_\_\_\_

3)



How many arms will 7 such starfish have?

\_\_\_\_\_

# PREVIEW

Access the largest collection of worksheets for just **\$19.95** per year!


Members, please log in to download this worksheet.

**Log in**

Not a member? Please sign up to gain complete access.

**Sign up**

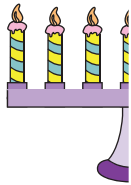
[www.mathworksheets4kids.com](http://www.mathworksheets4kids.com)



How many balloons will 7 such bags contain?

\_\_\_\_\_

5)



How many candles will 7 such candlesticks hold?

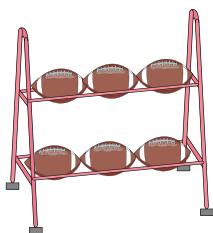
\_\_\_\_\_



How many roses will 7 such vases hold?

\_\_\_\_\_

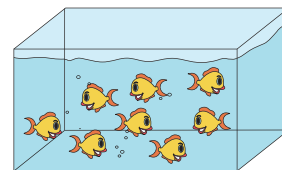
7)



How many rugby balls will 3 such stands hold?

\_\_\_\_\_

8)




How many fish will 4 such aquariums hold?

\_\_\_\_\_

**Multiplication Using Pictures**

Sheet 2

1)



How many cherries will 9 such pastries contain?

$$\underline{2 \times 9 = 18}$$

2)



How many beads will 8 such bracelets have?

$$\underline{10 \times 8 = 80}$$

3)



How many arms will 5 such starfish have?

$$\underline{5 \times 6 = 30}$$

**PREVIEW**

Access the largest collection of

worksheets for just **\$19.95** per year!


Members, please  
log in to  
download this  
worksheet.

**Log in**

Not a member?  
Please sign up to  
gain complete  
access.

**Sign up**

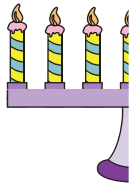
[www.mathworksheets4kids.com](http://www.mathworksheets4kids.com)



How many balloons will 7 such bags contain?

$$\underline{7 \times 9 = 63}$$

5)



How many candles will 7 such candlesticks hold?

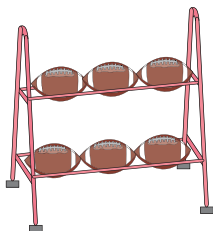
$$\underline{7 \times 8 = 56}$$



How many roses will 7 such vases hold?

$$\underline{7 \times 8 = 56}$$

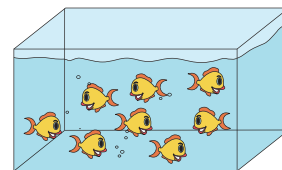
7)



How many rugby balls will 3 such stands hold?

$$\underline{6 \times 3 = 18}$$

8)



How many fish will 4 such aquariums hold?

$$\underline{8 \times 4 = 32}$$