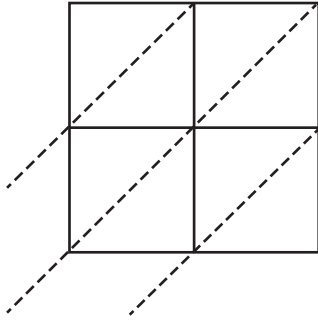


Lattice Multiplication

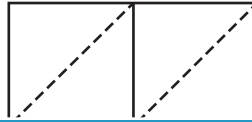
Use lattice multiplication method to find the product in each problem.

1) 62×54

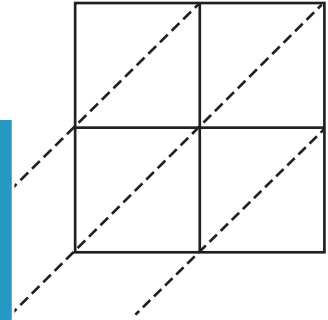


$62 \times 54 =$ _____

2) 87×10

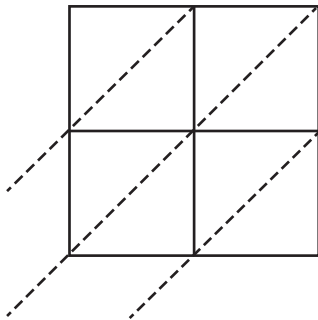


3) 33×78



$33 \times 78 =$ _____

4) 94×36



$94 \times 36 =$ _____

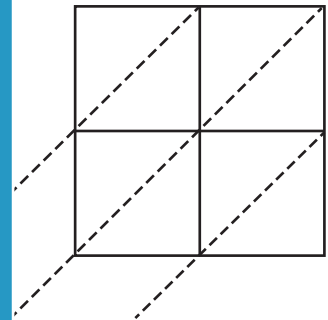
PREVIEW
Gain complete access to the largest
collection of worksheets in all subjects!

Members, please
log in to
download this
worksheet.

Not a member?
Please sign up to
gain complete
access.

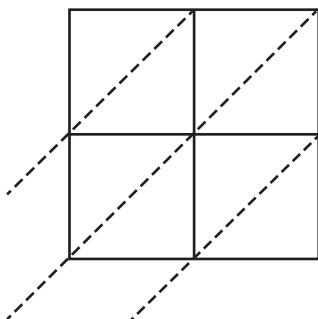
www.mathworksheets4kids.com

5) 15×23



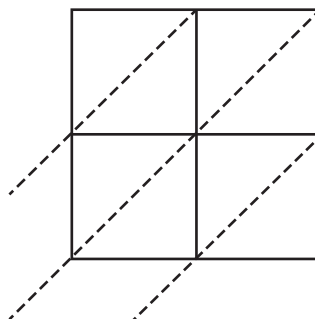
$15 \times 23 =$ _____

6) 50×81



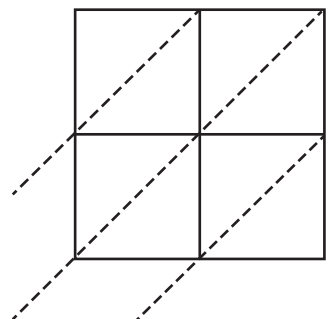
$50 \times 81 =$ _____

7) 27×69



$27 \times 69 =$ _____

8) 76×45



$76 \times 45 =$ _____