

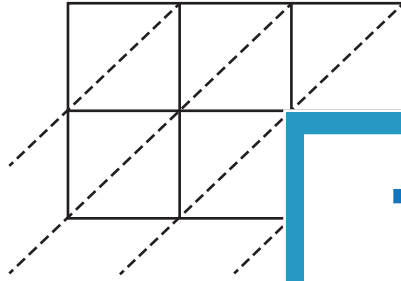
Name : _____

3-digit by 2-digit: S2

Lattice Multiplication

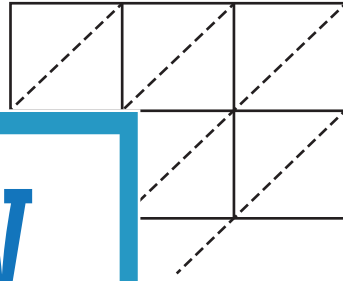
Use lattice multiplication method to find the product in each problem.

1) 746×49



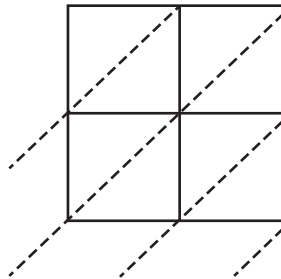
$746 \times 49 =$ _____

2) 561×90

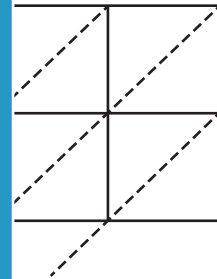


$=$ _____

3) 160×87

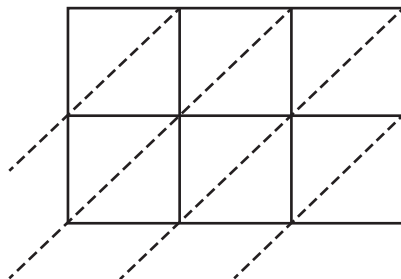


$160 \times 87 =$ _____



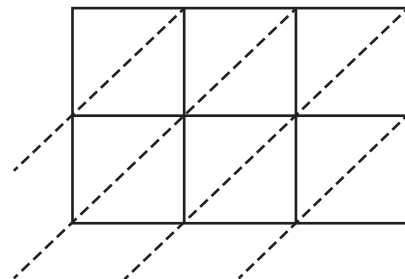
$=$ _____

5) 448×35



$448 \times 35 =$ _____

6) 681×58



$681 \times 58 =$ _____

PREVIEW
Gain complete access to the largest collection of worksheets in all subjects!

Members, please log in to download this worksheet.

Not a member? Please sign up to gain complete access.

www.mathworksheets4kids.com