

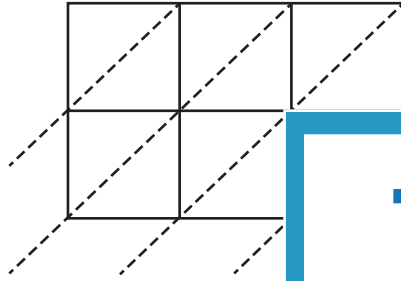
Name : _____

3-digit by 2-digit: S3

Lattice Multiplication

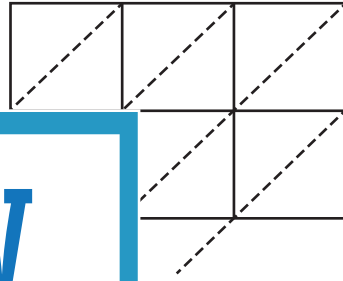
Use lattice multiplication method to find the product in each problem.

1) 159×83



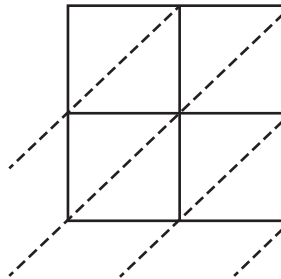
$159 \times 83 =$ _____

2) 782×24



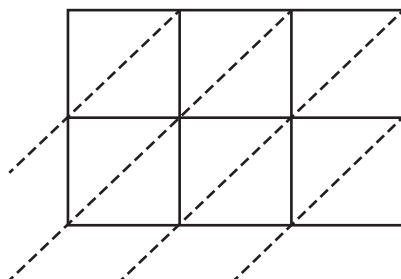
$=$ _____

3) 823×40



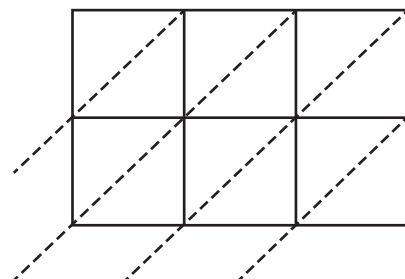
$823 \times 40 =$ _____

5) 367×51



$367 \times 51 =$ _____

6) 518×67



$518 \times 67 =$ _____

PREVIEW
Gain complete access to the largest
collection of worksheets in all subjects!

Members, please
log in to
download this
worksheet.

Not a member?
Please sign up to
gain complete
access.

www.mathworksheets4kids.com