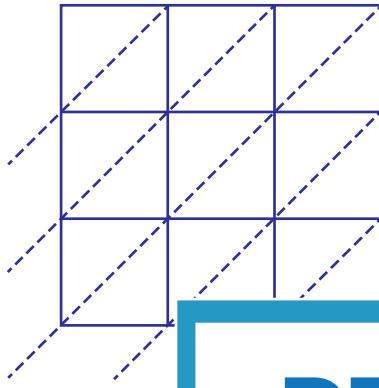


Lattice Multiplication

3-digit: 52

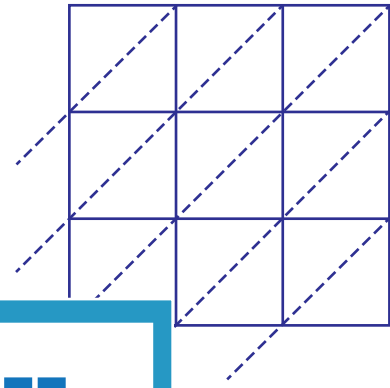
Use lattice multiplication method to find the product in each problem.

1) 459×372



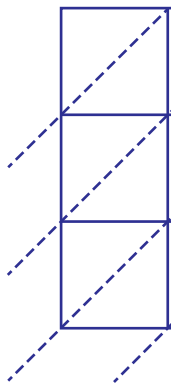
459×372

2) 934×750



$934 \times 750 =$ _____

3) 520×815



520×815

PREVIEW

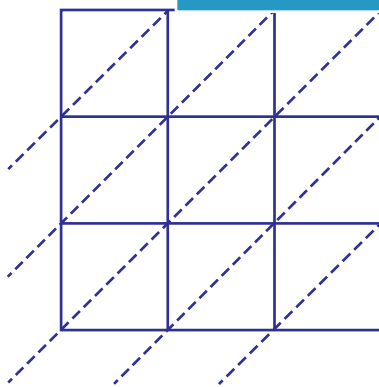
Gain complete access to the largest
collection of worksheets in all subjects!

Members, please
log in to
download this
worksheet.

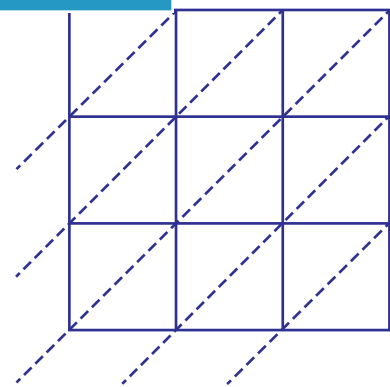
Not a member?
Please sign up to
gain complete
access.

$520 \times 815 =$ _____

5) 862×201



$862 \times 201 =$ _____



$693 \times 937 =$ _____

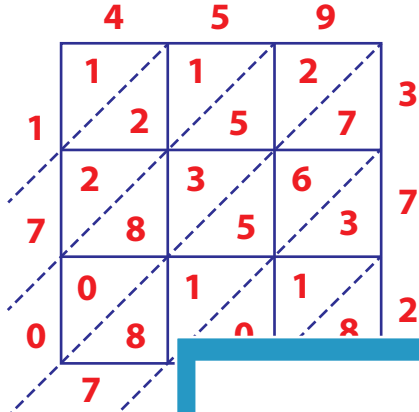
Answer Key

Lattice Multiplication

3-digit: 52

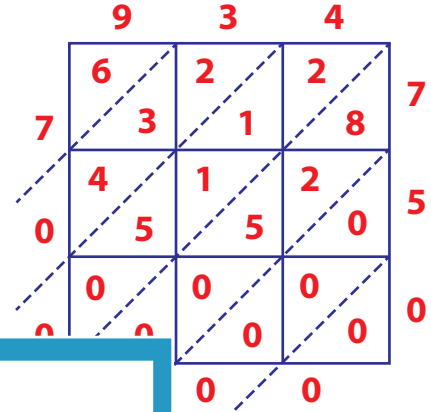
Use lattice multiplication method to find the product in each problem.

1) 459×372



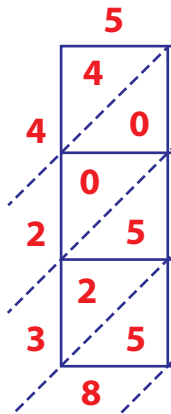
459×372

2) 934×750



$934 \times 750 = \underline{700,500}$

3) 520×815



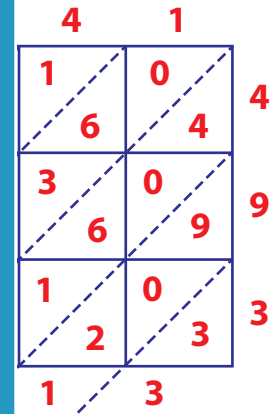
520×815

Gain complete access to the largest collection of worksheets in all subjects!

Members, please log in to download this worksheet.

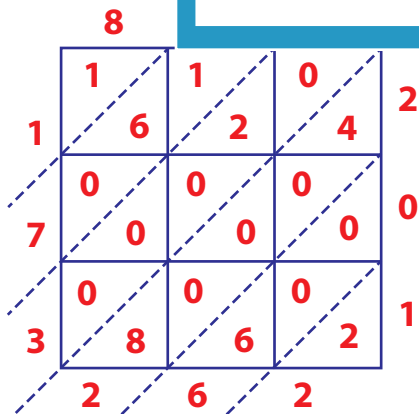
Not a member? Please sign up to gain complete access.

www.mathworksheets4kids.com

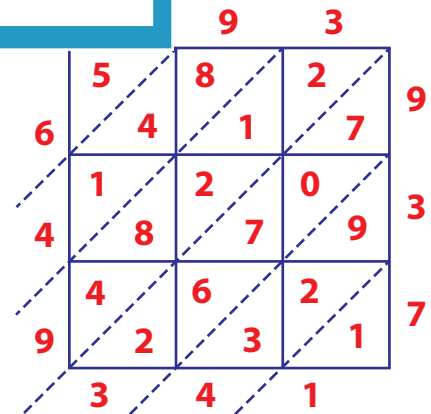


$520 \times 815 = \underline{118,813}$

5) 862×201



$862 \times 201 = \underline{173,262}$



$693 \times 937 = \underline{649,341}$