


Lattice Multiplication

3-digit: S3

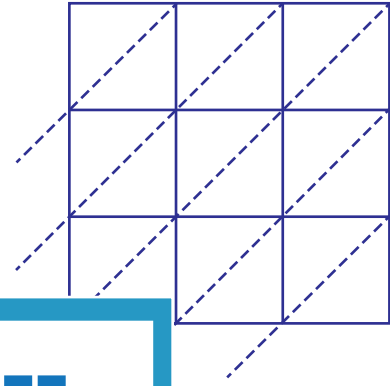
Use lattice multiplication method to find the product in each problem.

1) 572×643



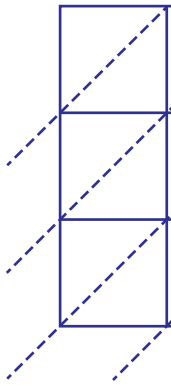
572×643

2) 839×167



$839 \times 167 =$ _____

3) 941×354



941×354

PREVIEW

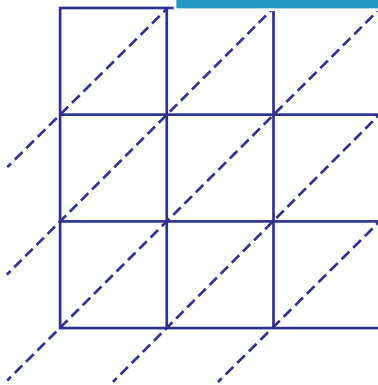
Gain complete access to the largest
collection of worksheets in all subjects!

Members, please
log in to
download this
worksheet.

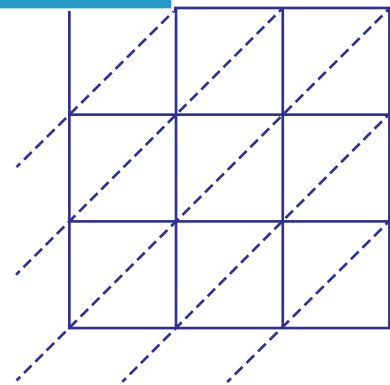
Not a member?
Please sign up to
gain complete
access.

$941 \times 354 =$ _____

5) 618×491



$618 \times 491 =$ _____



$726 \times 238 =$ _____

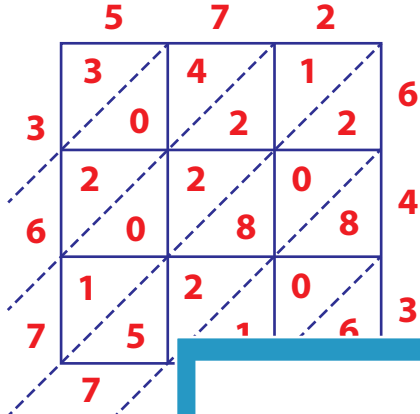
Answer Key

Lattice Multiplication

3-digit: S3

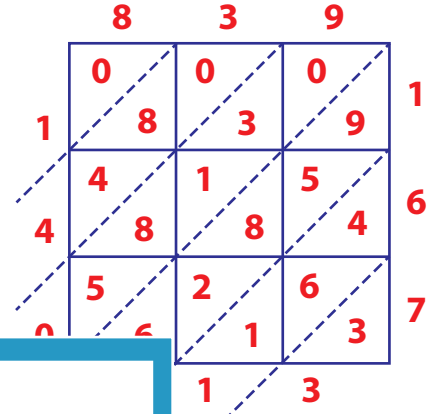
Use lattice multiplication method to find the product in each problem.

1) 572×643



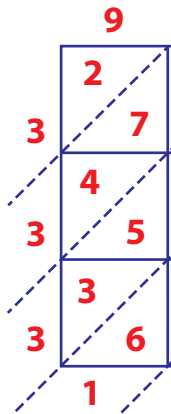
572×643

2) 839×167



$839 \times 167 = \underline{140,113}$

3) 941×354



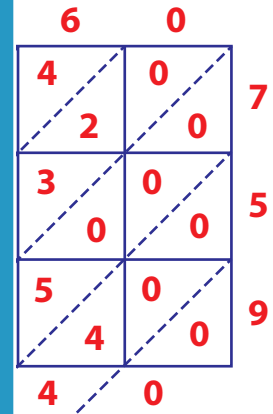
941×354

Gain complete access to the largest collection of worksheets in all subjects!

Members, please log in to download this worksheet.

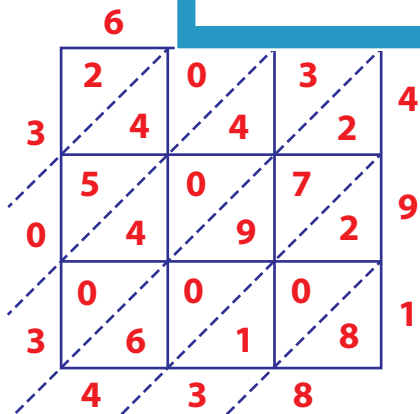
Not a member? Please sign up to gain complete access.

www.mathworksheets4kids.com

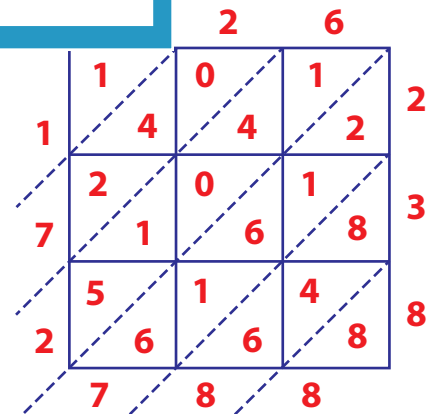


$941 \times 354 = \underline{273,240}$

5) 618×491



$618 \times 491 = \underline{303,438}$



$726 \times 238 = \underline{172,788}$