


Lattice Multiplication

3-digit: 54

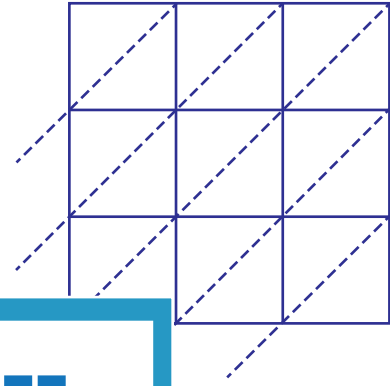
Use lattice multiplication method to find the product in each problem.

1) 756×495



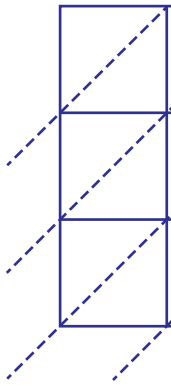
756×495

2) 291×649



$291 \times 649 =$ _____

3) 157×864



157×864

PREVIEW

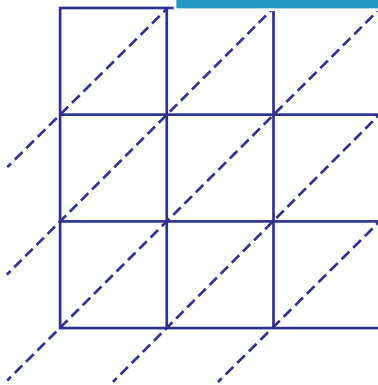
Gain complete access to the largest
collection of worksheets in all subjects!

Members, please
log in to
download this
worksheet.

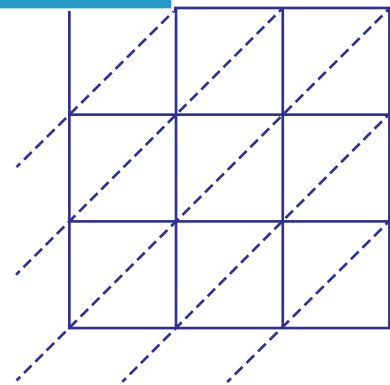
Not a member?
Please sign up to
gain complete
access.

$157 \times 864 =$ _____

5) 420×936



$420 \times 936 =$ _____



$685 \times 371 =$ _____

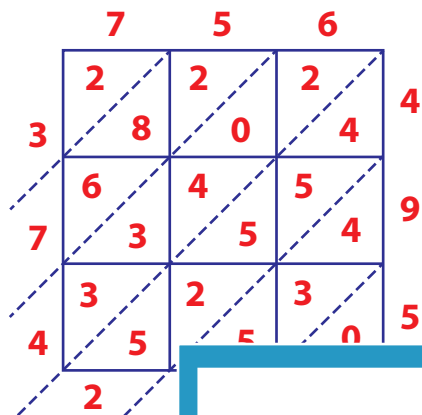
Answer Key

Lattice Multiplication

3-digit: 54

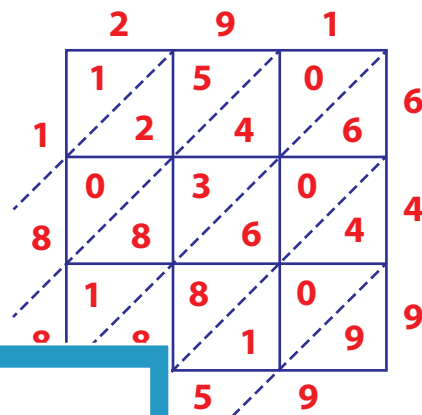
Use lattice multiplication method to find the product in each problem.

1) 756×495



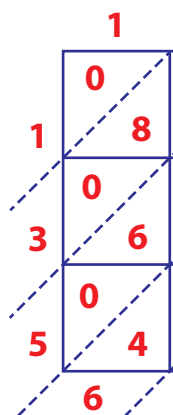
$756 \times 495 =$

2) 291×649



$291 \times 649 =$ 188,859

3) 157×864



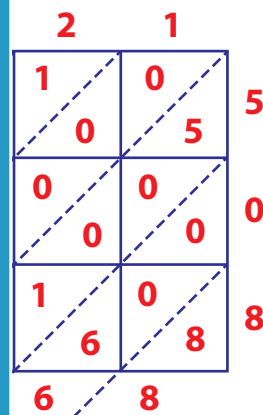
$157 \times 864 =$

Gain complete access to the largest collection of worksheets in all subjects!

Members, please log in to download this worksheet.

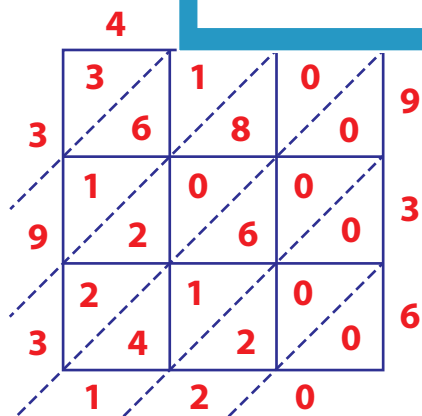
Not a member? Please sign up to gain complete access.

www.mathworksheets4kids.com

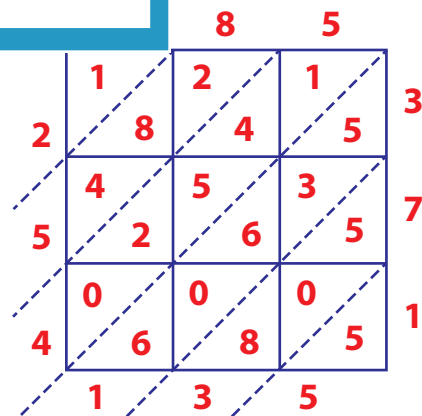


$157 \times 864 =$ 135,888

5) 420×936



$420 \times 936 =$ 393,120



$685 \times 371 =$ 254,135