


## Lattice Multiplication

3-digit: S5

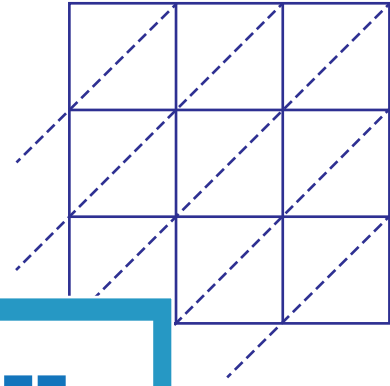
Use lattice multiplication method to find the product in each problem.

1)  $820 \times 546$



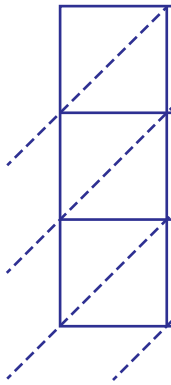
$820 \times 546$

2)  $164 \times 372$



$164 \times 372 =$  \_\_\_\_\_

3)  $316 \times 950$



$316 \times 950$

**PREVIEW**

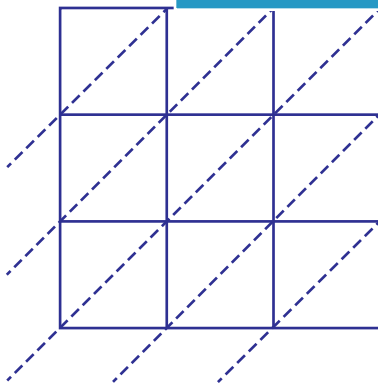
Gain complete access to the largest  
collection of worksheets in all subjects!

Members, please  
log in to  
download this  
worksheet.

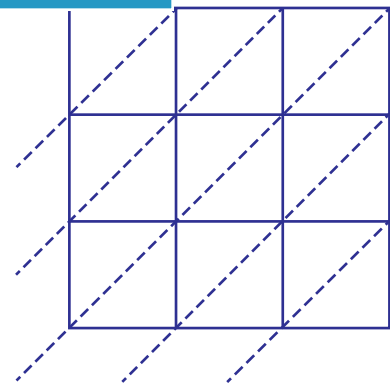
Not a member?  
Please sign up to  
gain complete  
access.

$316 \times 950 =$  \_\_\_\_\_

5)  $678 \times 481$



$678 \times 481 =$  \_\_\_\_\_



$539 \times 713 =$  \_\_\_\_\_

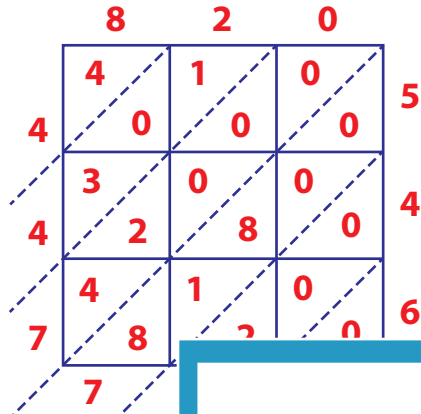
**Answer Key**

**Lattice Multiplication**

3-digit: S5

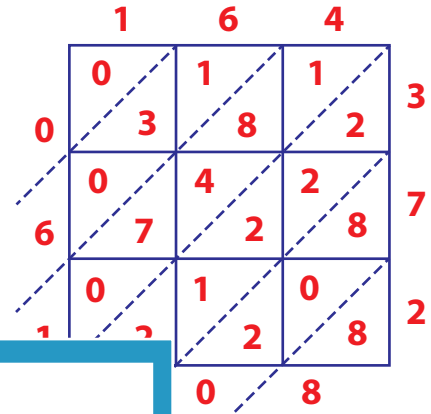
Use lattice multiplication method to find the product in each problem.

1)  $820 \times 546$



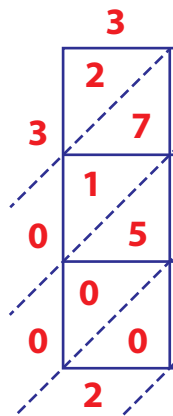
$820 \times 546$

2)  $164 \times 372$



$164 \times 372 = \underline{61,008}$

3)  $316 \times 950$



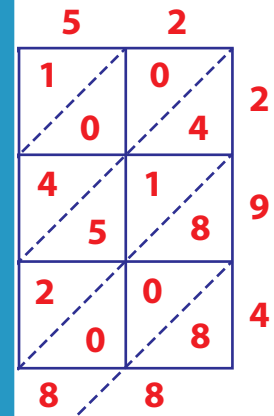
$316 \times 950$

Gain complete access to the largest collection of worksheets in all subjects!

Members, please log in to download this worksheet.

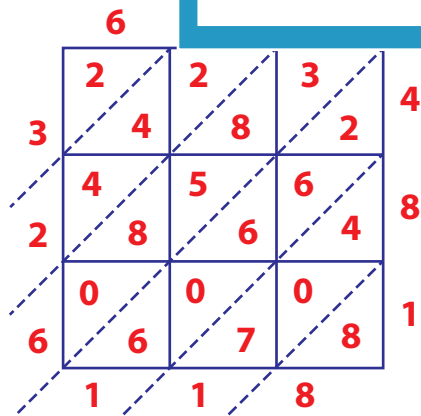
Not a member? Please sign up to gain complete access.

[www.mathworksheets4kids.com](http://www.mathworksheets4kids.com)

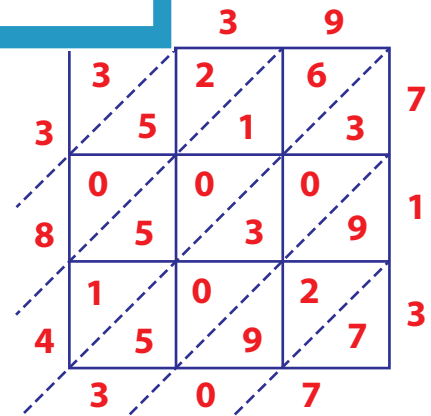


$316 \times 950 = \underline{221,088}$

5)  $678 \times 481$



$678 \times 481 = \underline{326,118}$



$539 \times 713 = \underline{384,307}$