

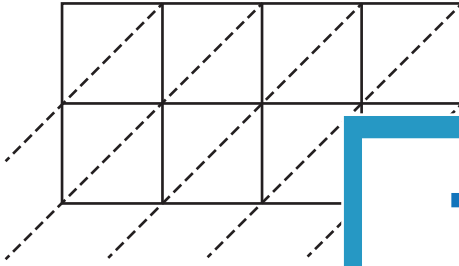
Name : _____

4-digit by 2-digit: S3

Lattice Multiplication

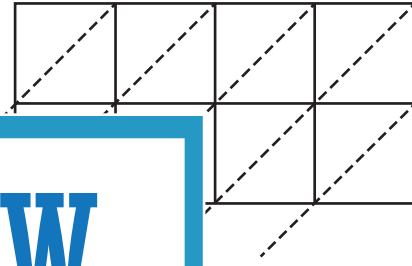
Use lattice multiplication method to find the product in each problem.

1) $5,248 \times 95$



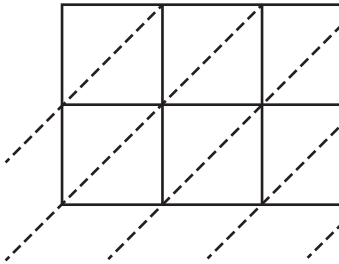
$5,248 \times 95 =$ _____

2) $7,126 \times 14$



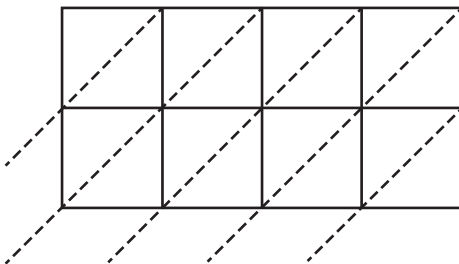
$7,126 \times 14 =$ _____

3) $6,352 \times 39$



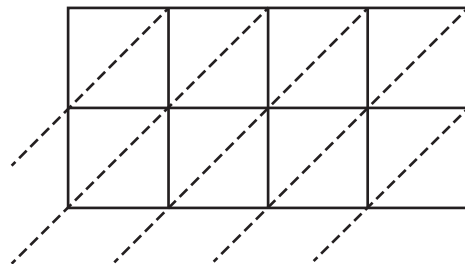
$6,352 \times 39 =$ _____

5) $9,761 \times 53$



$9,761 \times 53 =$ _____

6) $4,570 \times 76$



$4,570 \times 76 =$ _____

PREVIEW

Gain complete access to the largest collection of worksheets in all subjects!

Members, please log in to download this worksheet.

Not a member? Please sign up to gain complete access.

www.mathworksheets4kids.com