


Lattice Multiplication

4-digit by 3-digit: S1

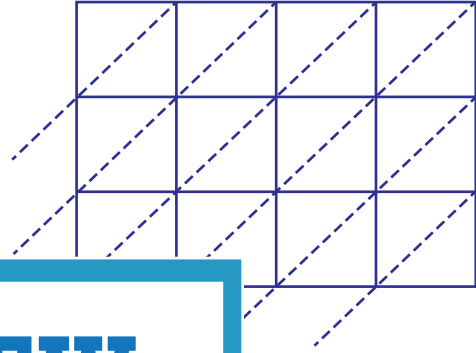
Use lattice multiplication method to find the product in each problem.

1) 9346×252



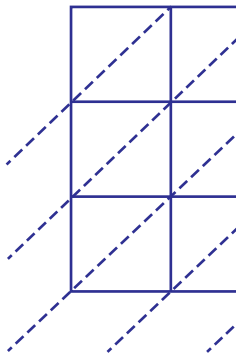
$9346 \times 252 =$ _____

2) 4598×710



$4598 \times 710 =$ _____

3) 1657×635



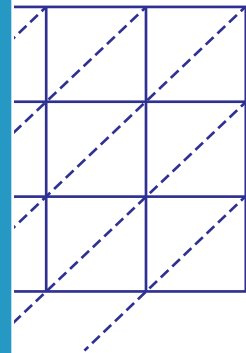
$1657 \times 635 =$ _____

PREVIEW

Gain complete access to the largest
collection of worksheets in all subjects!

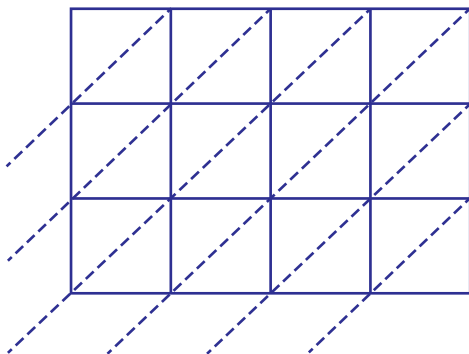
Members, please
log in to
download this
worksheet.

Not a member?
Please sign up to
gain complete
access.

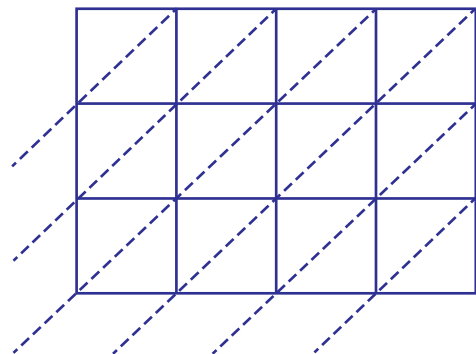


$1657 \times 635 =$ _____

5) 8419×948



$8419 \times 948 =$ _____



$7450 \times 381 =$ _____

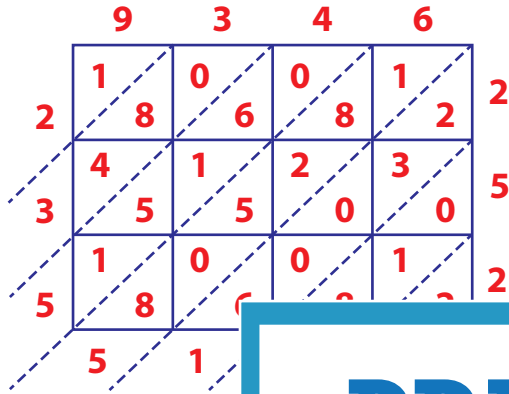
Answer Key

Lattice Multiplication

4-digit by 3-digit: S1

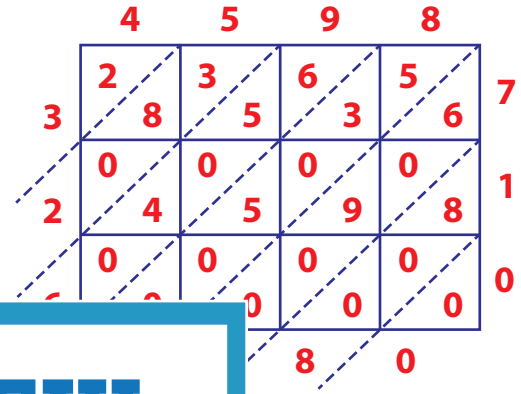
Use lattice multiplication method to find the product in each problem.

1) 9346×252



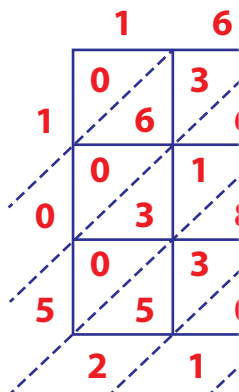
$9346 \times 252 =$

2) 4598×710



$= \underline{3,264,580}$

3) 1657×635



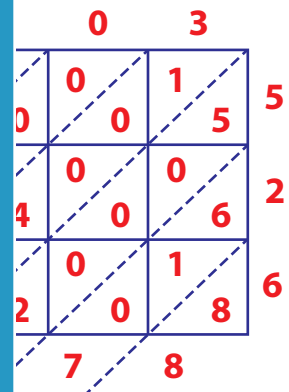
$1657 \times 635 =$

Gain complete access to the largest collection of worksheets in all subjects!

Members, please log in to download this worksheet.

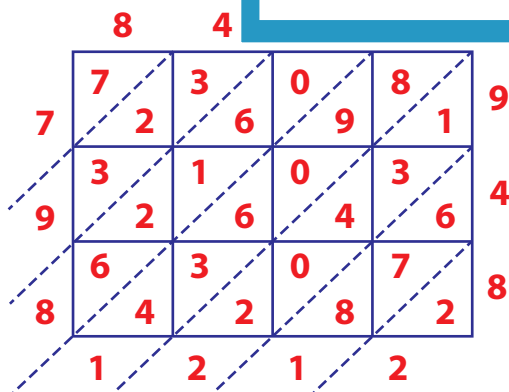
Not a member? Please sign up to gain complete access.

www.mathworksheets4kids.com

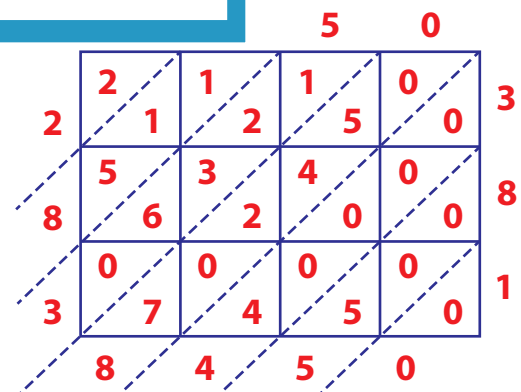


$= \underline{2,736,778}$

5) 8419×948



$8419 \times 948 = \underline{7,981,212}$



$7450 \times 381 = \underline{2,838,450}$