


Lattice Multiplication

4-digit by 3-digit: S2

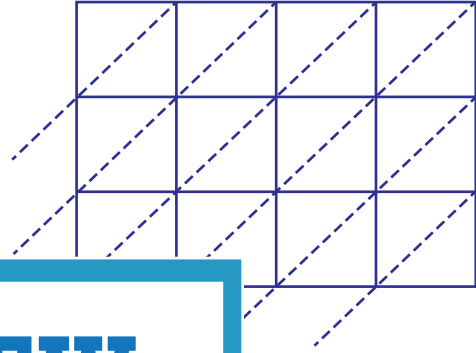
Use lattice multiplication method to find the product in each problem.

1) 5647×119



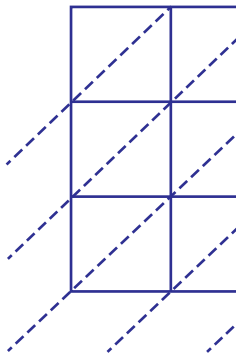
$5647 \times 119 =$ _____

2) 8321×472



$8321 \times 472 =$ _____

3) 2406×864



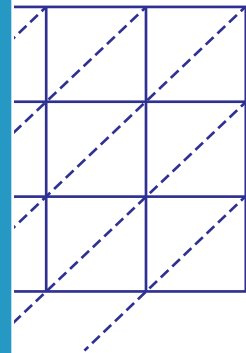
$2406 \times 864 =$ _____

PREVIEW

Gain complete access to the largest
collection of worksheets in all subjects!

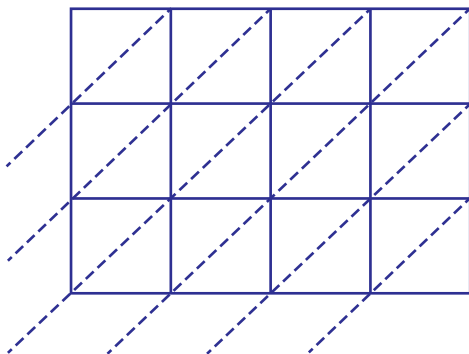
Members, please
log in to
download this
worksheet.

Not a member?
Please sign up to
gain complete
access.

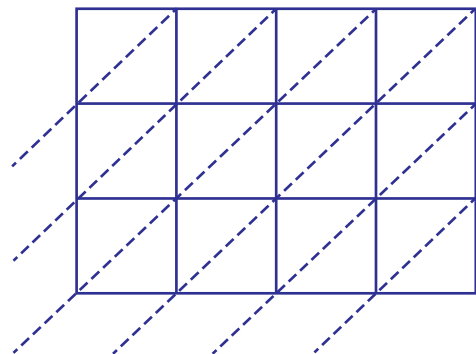


$2406 \times 864 =$ _____

5) 7349×130



$7349 \times 130 =$ _____



$3460 \times 975 =$ _____

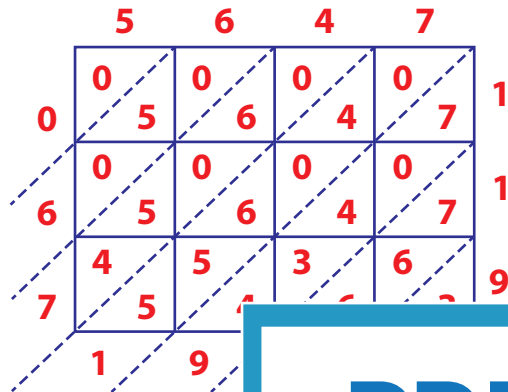
Answer Key

Lattice Multiplication

4-digit by 3-digit: S2

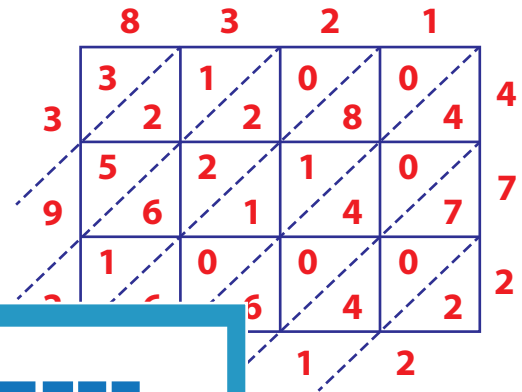
Use lattice multiplication method to find the product in each problem.

1) 5647×119



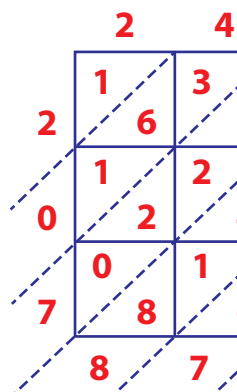
$5647 \times 119 =$

2) 8321×472



$= \underline{3,927,512}$

3) 2406×864



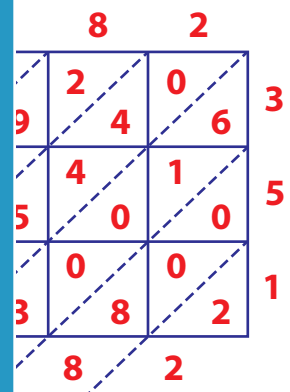
$2406 \times 864 =$

Gain complete access to the largest collection of worksheets in all subjects!

Members, please log in to download this worksheet.

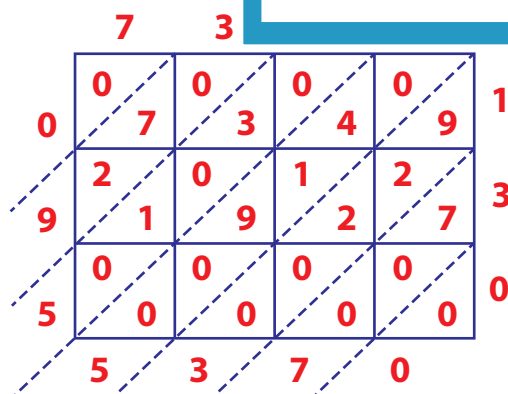
Not a member? Please sign up to gain complete access.

www.mathworksheets4kids.com

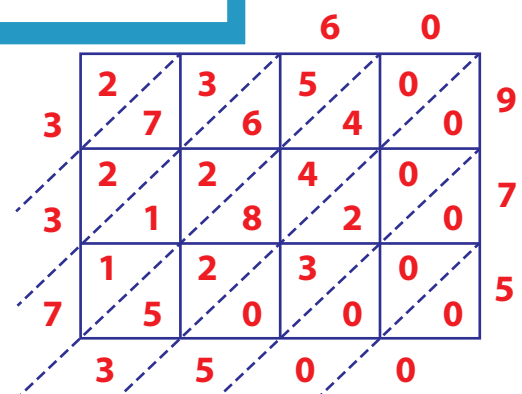


$= \underline{2,240,082}$

5) 7349×130



$7349 \times 130 = \underline{955,370}$



$3460 \times 975 = \underline{3,373,500}$