

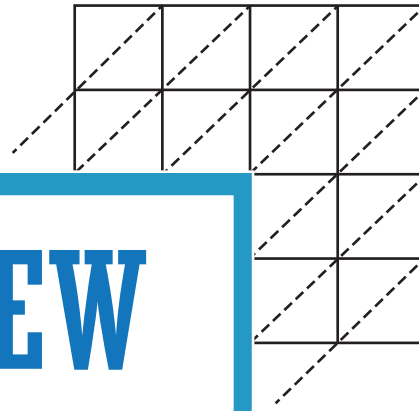
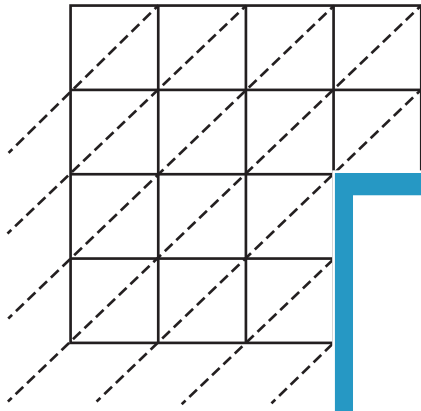
Name : _____

Lattice Multiplication

Use lattice multiplication method to find the product in each problem.

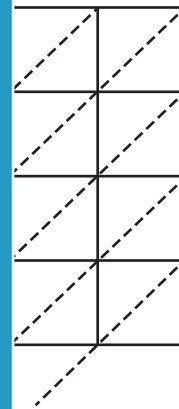
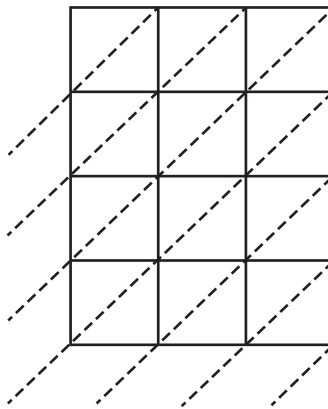
1) $4,631 \times 7,542 =$ _____

2) $6,585 \times 1,370 =$ _____



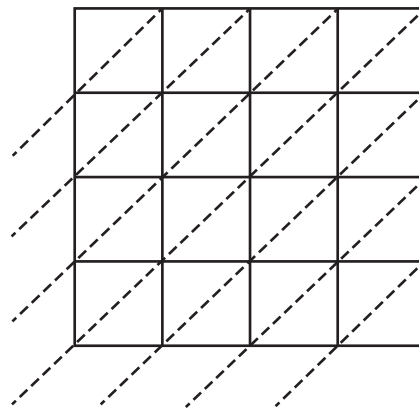
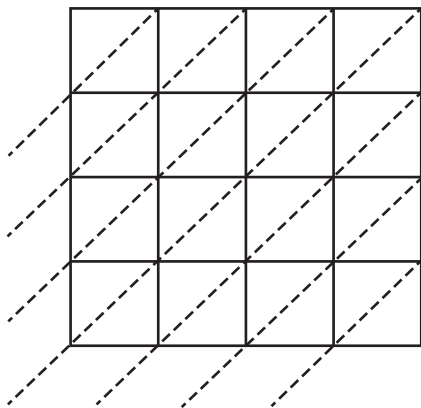
3) $2,962 \times 5,618 =$ _____

$=$ _____



5) $8,412 \times 3,773 =$ _____

$=$ _____



PREVIEW

Gain complete access to the largest collection of worksheets in all subjects!

Members, please log in to download this worksheet.

Not a member? Please sign up to gain complete access.

www.mathworksheets4kids.com