

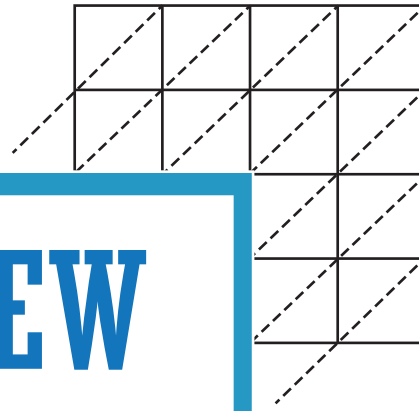
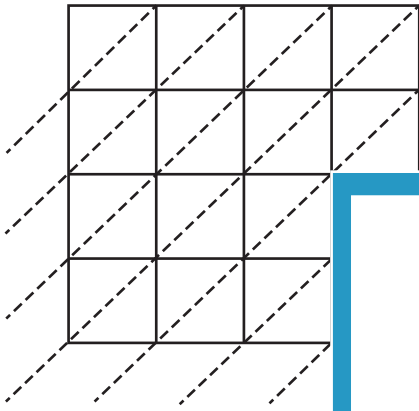
Name : \_\_\_\_\_

# Lattice Multiplication

Use lattice multiplication method to find the product in each problem.

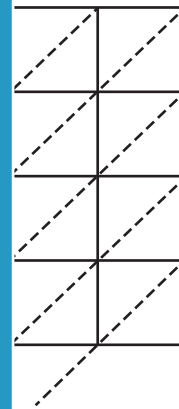
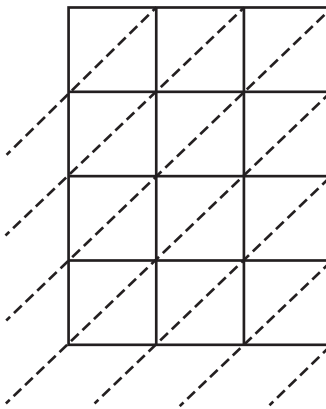
1)  $5,124 \times 8,541 =$  \_\_\_\_\_

2)  $9,657 \times 2,983 =$  \_\_\_\_\_



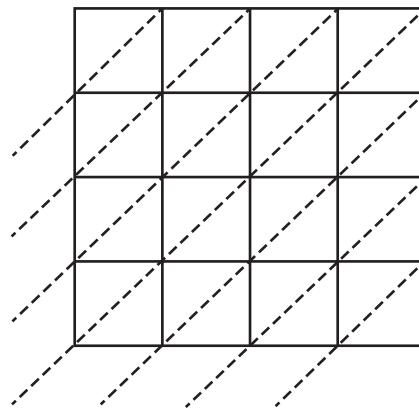
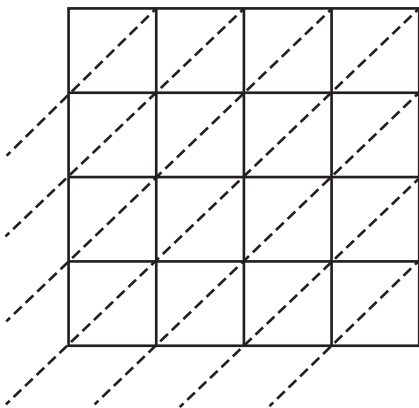
3)  $7,652 \times 3,645 =$  \_\_\_\_\_

$=$  \_\_\_\_\_



5)  $1,249 \times 6,213 =$  \_\_\_\_\_

$=$  \_\_\_\_\_



**PREVIEW**

Gain complete access to the largest collection of worksheets in all subjects!

Members, please log in to download this worksheet.

Not a member? Please sign up to gain complete access.

[www.mathworksheets4kids.com](http://www.mathworksheets4kids.com)