


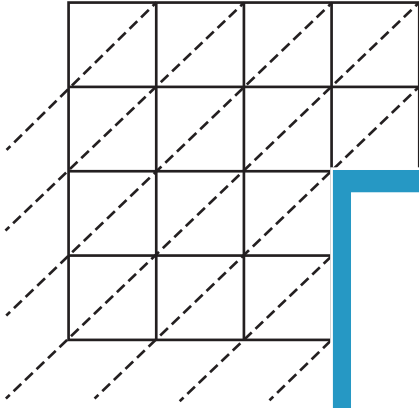
Name : _____

Lattice Multiplication

Use lattice multiplication method to find the product in each problem.

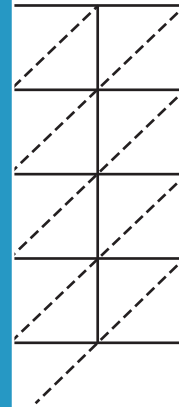
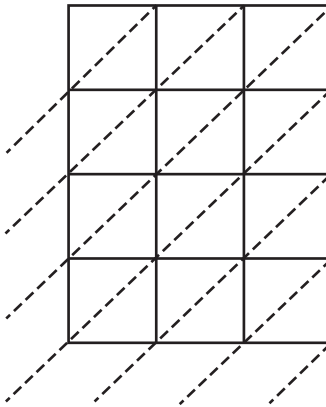
1) $7,321 \times 1,589 =$ _____

2) $4,595 \times 5,878 =$ _____



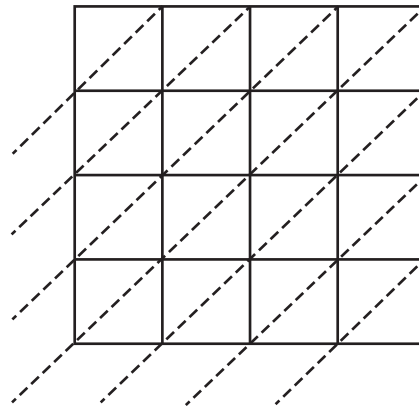
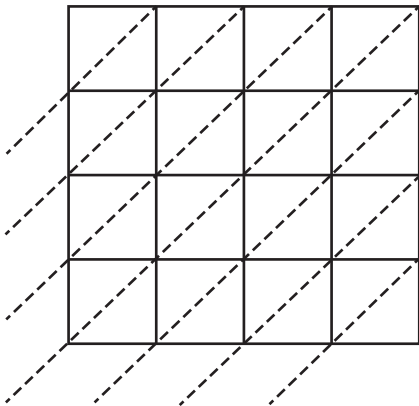
3) $1,123 \times 4,987 =$ _____

$=$ _____



5) $6,314 \times 8,791 =$ _____

$=$ _____



PREVIEW

Gain complete access to the largest collection of worksheets in all subjects!

Members, please log in to download this worksheet.

Not a member? Please sign up to gain complete access.

www.mathworksheets4kids.com