

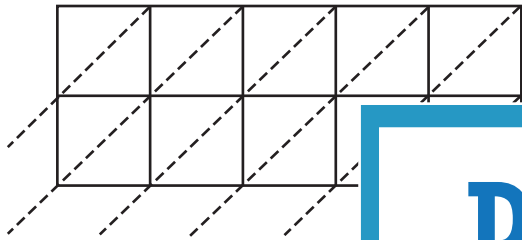
Name : _____

5-digit by 2-digit: S2

Lattice Multiplication


Use lattice multiplication method to find the product in each problem.

1) $64,982 \times 25$



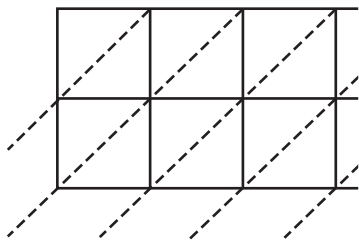
$64,982 \times 25 =$ _____

2) $53,671 \times 39$



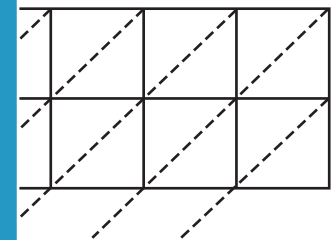
$53,671 \times 39 =$ _____

3) $26,430 \times 13$



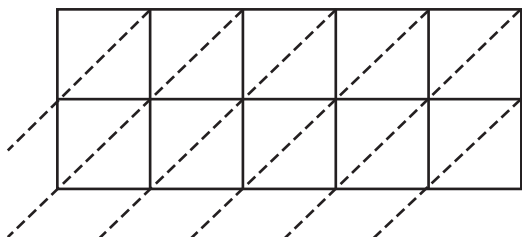
$26,430 \times 13 =$ _____

4) 98×3



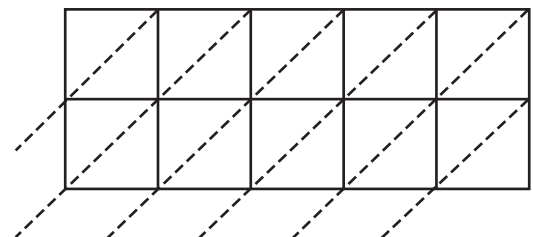
$98 \times 3 =$ _____

5) $80,651 \times 46$



$80,651 \times 46 =$ _____

6) $31,504 \times 72$



$31,504 \times 72 =$ _____

PREVIEW

Gain complete access to the largest collection of worksheets in all subjects!

Members, please log in to download this worksheet.

Not a member? Please sign up to gain complete access.

www.mathworksheets4kids.com