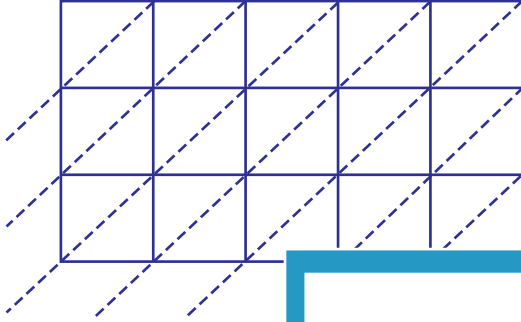


Lattice Multiplication

5-digit by 3-digit: S1

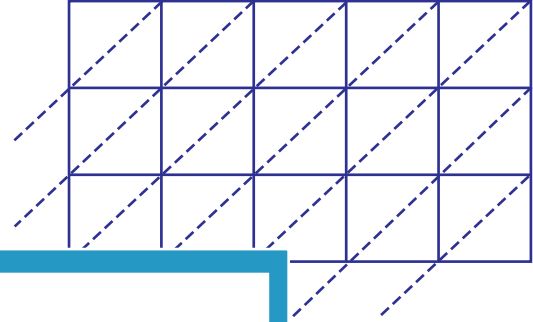
Use lattice multiplication method to find the product in each problem.

1) 10684×454



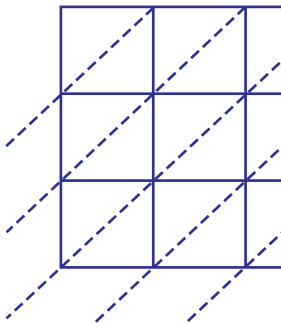
$10684 \times 454 =$ _____

2) 56473×157



$56473 \times 157 =$ _____

3) 96470×325



$96470 \times 325 =$ _____

PREVIEW

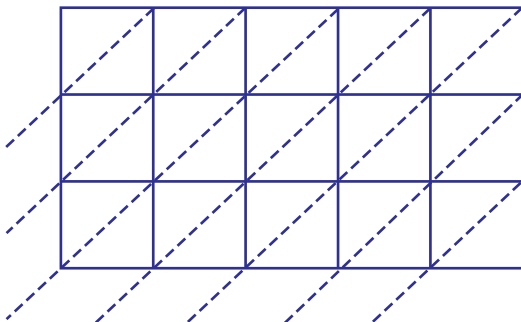
Gain complete access to the largest
collection of worksheets in all subjects!

Members, please
log in to
download this
worksheet.

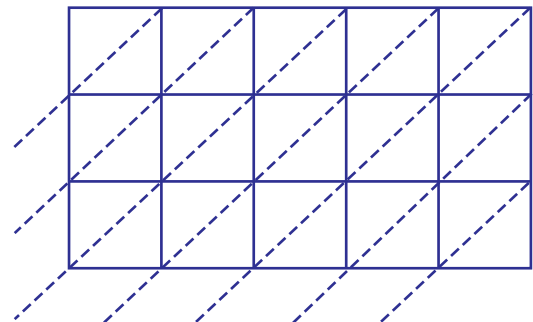
Not a member?
Please sign up to
gain complete
access.

www.mathworksheets4kids.com

5) 45988×549



$45988 \times 549 =$ _____



$36007 \times 927 =$ _____

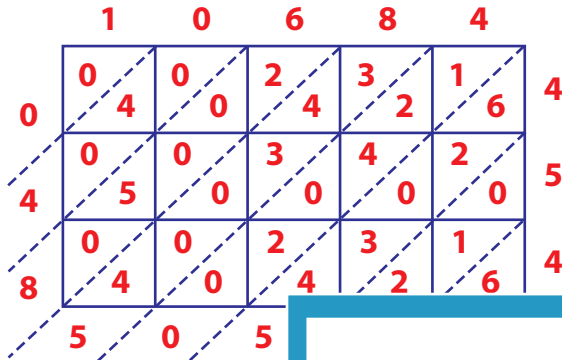
Answer Key

Lattice Multiplication

5-digit by 3-digit: S1

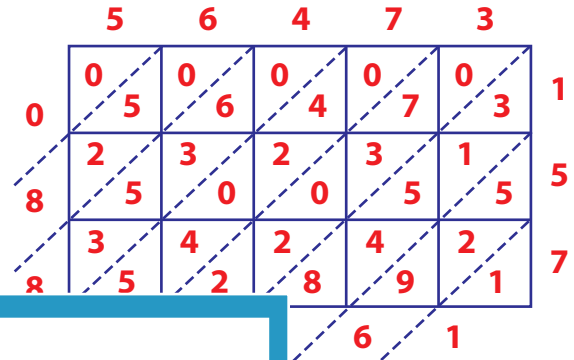
Use lattice multiplication method to find the product in each problem.

1) 10684×454



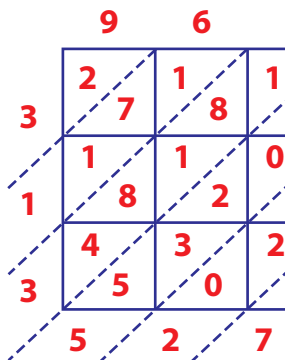
$10684 \times 454 =$

2) 56473×157



$= \underline{8,866,261}$

3) 96470×325



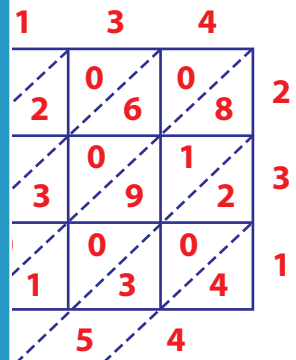
$96470 \times 325 =$

Gain complete access to the largest collection of worksheets in all subjects!

Members, please log in to download this worksheet.

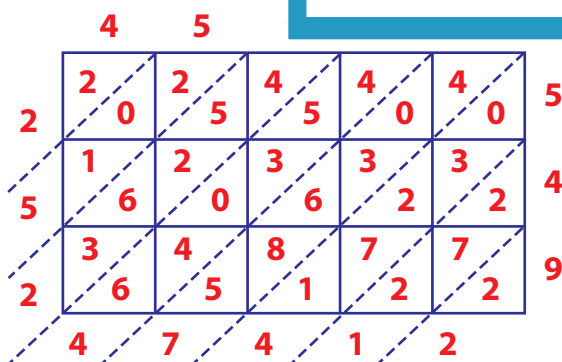
Not a member? Please sign up to gain complete access.

www.mathworksheets4kids.com

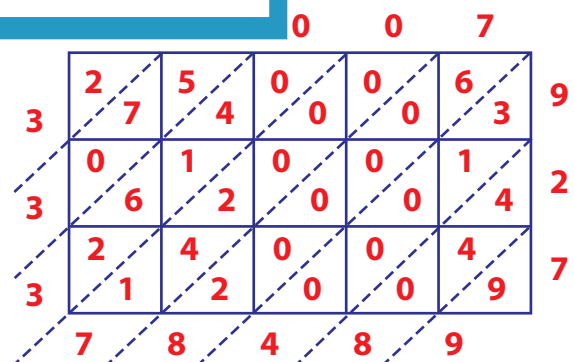


$= \underline{15,507,954}$

5) 45988×549



$45988 \times 549 = \underline{25,247,412}$



$36007 \times 927 = \underline{33,378,489}$