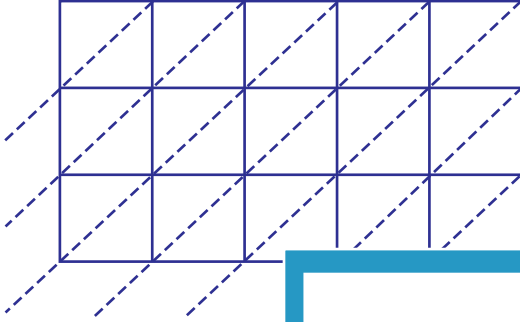


Lattice Multiplication

5-digit by 3-digit: S3

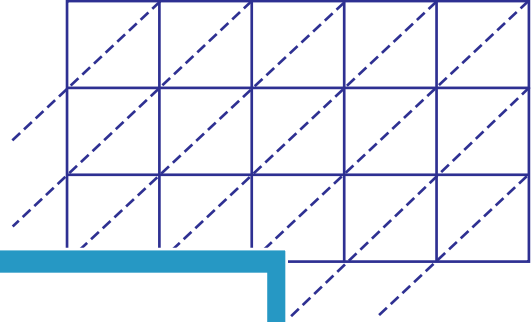
Use lattice multiplication method to find the product in each problem.

1) 89412×100



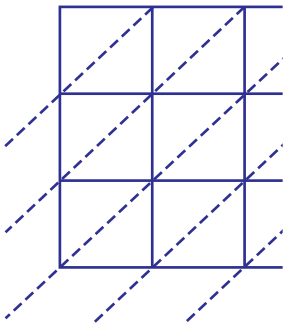
$89412 \times 100 =$ _____

2) 30989×475



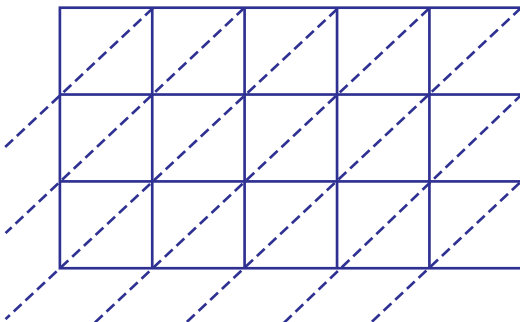
$30989 \times 475 =$ _____

3) 46231×645

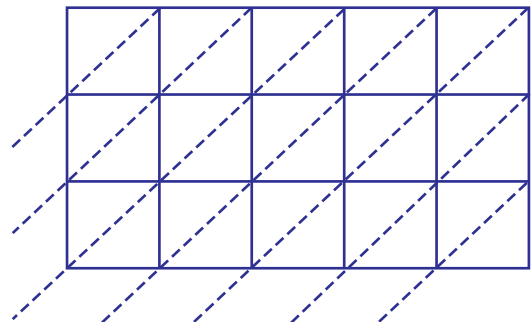


$46231 \times 645 =$ _____

5) 94783×793



$94783 \times 793 =$ _____



$76430 \times 236 =$ _____

PREVIEW

Gain complete access to the largest
collection of worksheets in all subjects!

Members, please
log in to
download this
worksheet.

Not a member?
Please sign up to
gain complete
access.

www.mathworksheets4kids.com

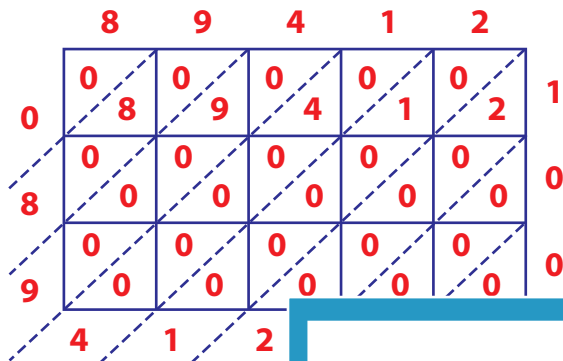
Answer Key

Lattice Multiplication

5-digit by 3-digit: S3

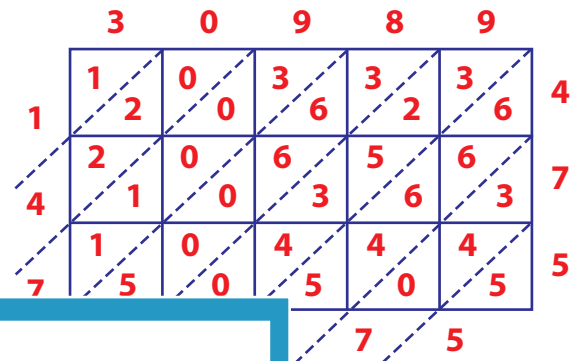
Use lattice multiplication method to find the product in each problem.

1) 89412×100



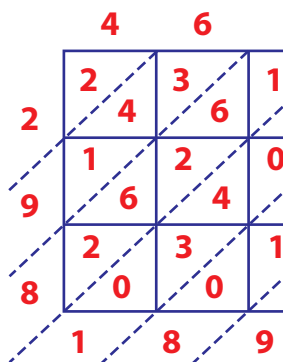
$89412 \times 100 =$

2) 30989×475



$= \underline{14,719,775}$

3) 46231×645

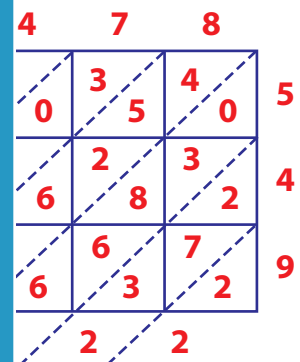


$46231 \times 645 =$

Gain complete access to the largest collection of worksheets in all subjects!

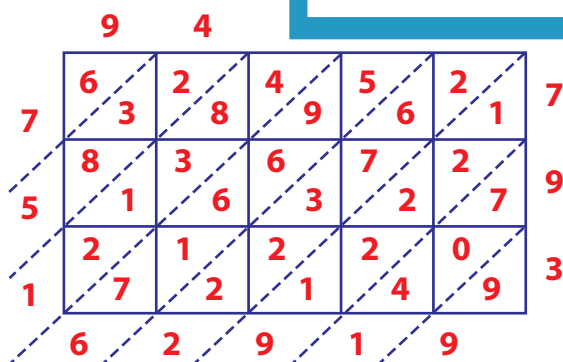
Members, please log in to download this worksheet.

Not a member? Please sign up to gain complete access.

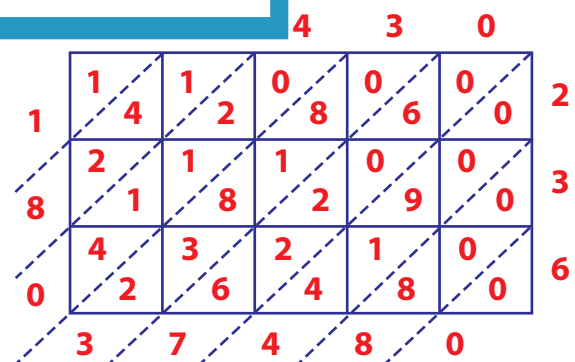
www.mathworksheets4kids.com

$= \underline{14,536,422}$

5) 94783×793



$94783 \times 793 = \underline{75,162,919}$



$76430 \times 236 = \underline{18,037,480}$