


Name : _____

Multiplication Sentence - Area


Draw: S5

Draw an area model to find the answer to each multiplication sentence.

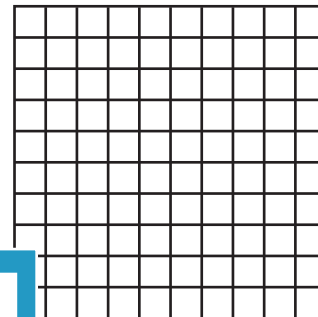
1) $9 \times 2 = \underline{\quad}$




2) $10 \times 8 = \underline{\quad}$




3) $4 \times 7 = \underline{\quad}$



4) $7 \times 8 = \underline{\quad}$



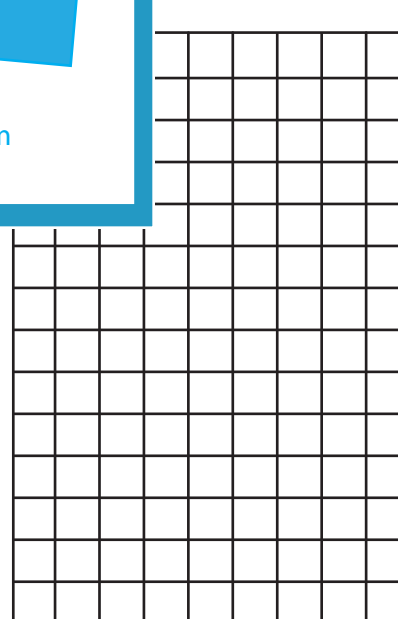
5) $2 \times 10 = \underline{\quad}$




7) $5 \times 12 = \underline{\quad}$



8) $9 = \underline{\quad}$



9) $6 \times 8 = \underline{\quad}$



PREVIEW

Gain complete access to the largest
collection of worksheets in all subjects!

Members, please
log in to
download this
worksheet.

Not a member?
Please sign up to
gain complete
access.

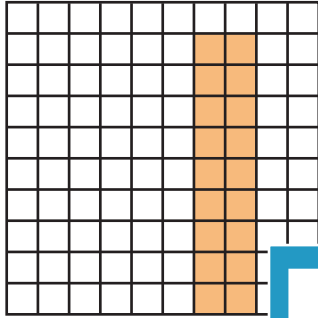
www.mathworksheets4kids.com

Multiplication Sentence - Area

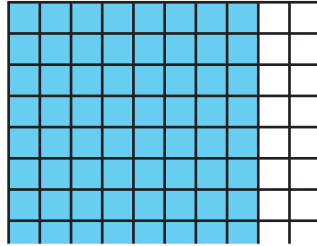
Draw an area model to find the answer to each multiplication sentence.

(Drawings may vary.)

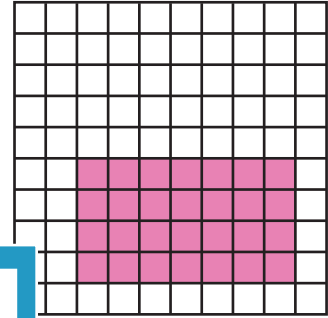
1) $9 \times 2 = \underline{18}$




2) $10 \times 8 = \underline{80}$




3) $4 \times 7 = \underline{28}$




4) $7 \times 8 = \underline{56}$




5) $2 \times 10 = \underline{20}$




6) $5 \times 12 = \underline{60}$



7) $9 \times 11 = \underline{99}$



8) $6 \times 8 = \underline{48}$



PREVIEW

Gain complete access to the largest
collection of worksheets in all subjects!

Members, please
log in to
download this
worksheet.

Not a member?
Please sign up to
gain complete
access.

www.mathworksheets4kids.com