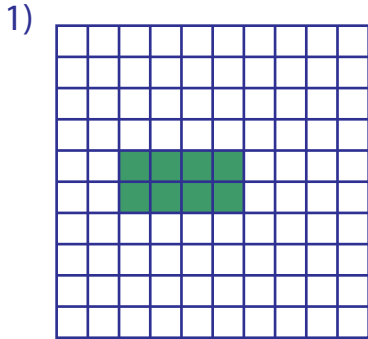


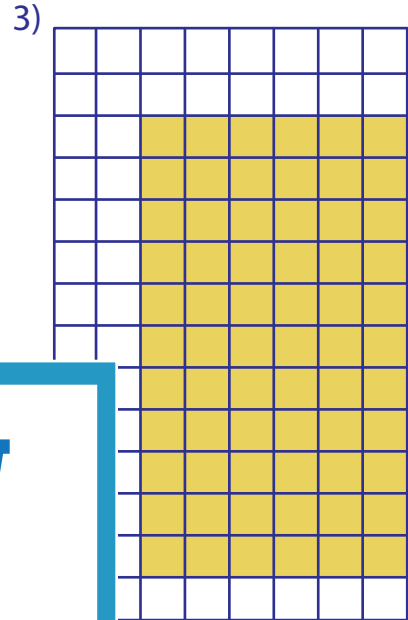
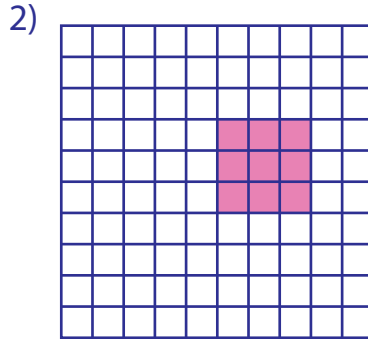
Multiplication Sentence - Area

Mixed: S2

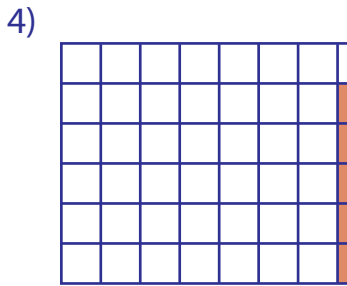
A) Write a multiplication sentence to each model.



___ × ___ = ___



___ × ___ = ___



___ × ___ = ___

PREVIEW

Gain complete access to the largest collection of worksheets in all subjects!


Members, please log in to download this worksheet.

Not a member? Please sign up to gain complete access.

www.mathworksheets4kids.com

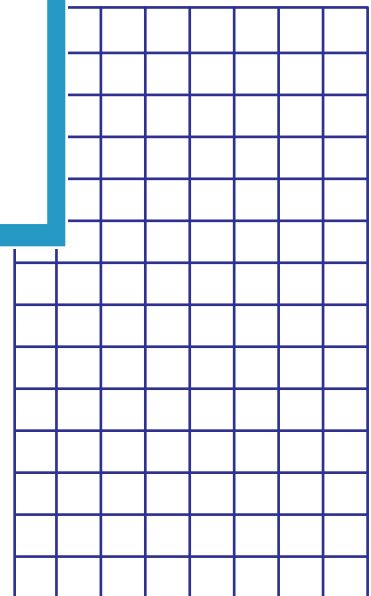
B) Draw an area model

1) $3 \times 4 =$ _____




sentence.

___ × 2 = _____



4) $6 \times 10 =$ _____

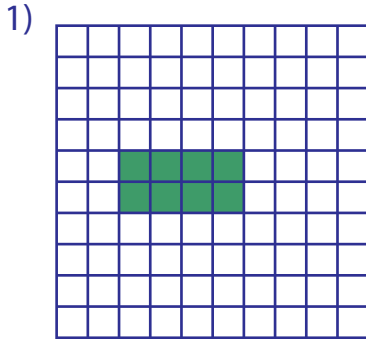


Answer Key

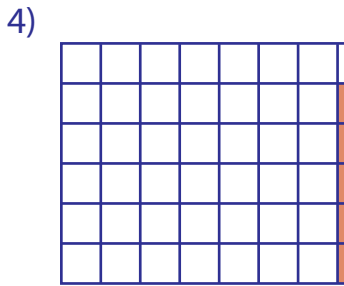
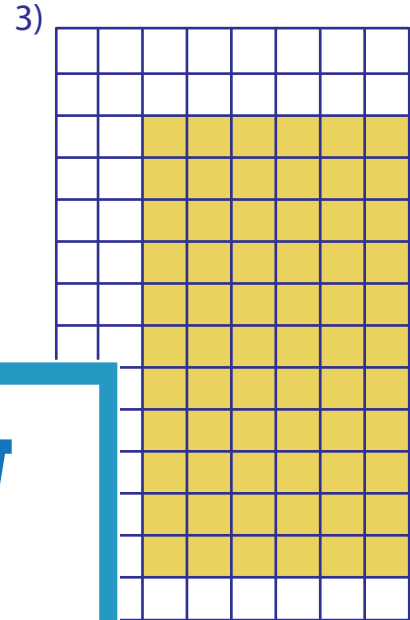
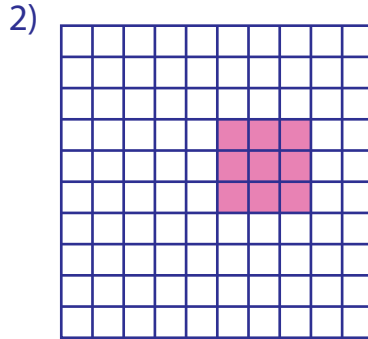
Multiplication Sentence - Area

Mixed: S2

A) Write a multiplication sentence to each model.



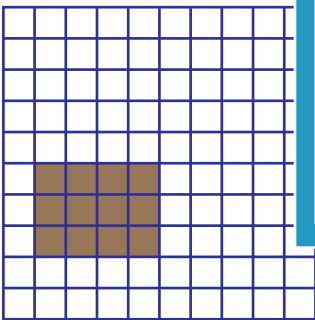
$2 \times 4 = 8$




$5 \times 1 = 5$

B) Draw an area model for the multiplication sentence.
(Drawings may vary)

1) $3 \times 4 = 12$



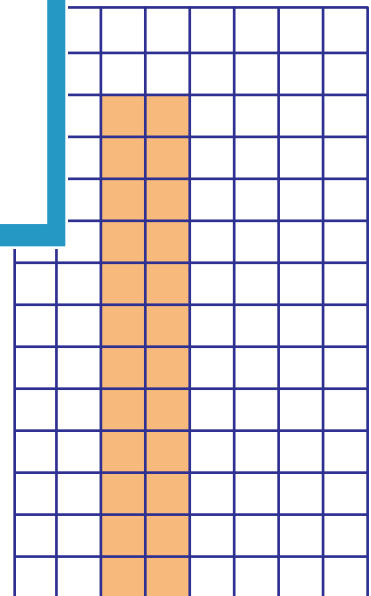
4) $6 \times 10 = 60$



$11 \times 6 = 66$

Write a multiplication sentence.

$4 \times 6 = 24$



PREVIEW

Gain complete access to the largest collection of worksheets in all subjects!

Members, please log in to download this worksheet.

Not a member? Please sign up to gain complete access.

www.mathworksheets4kids.com