

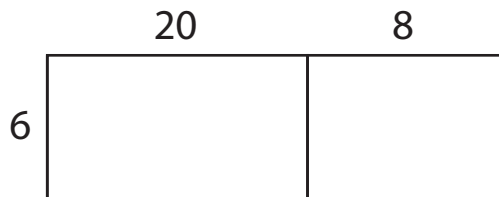
Name : \_\_\_\_\_

## Area Model Multiplication

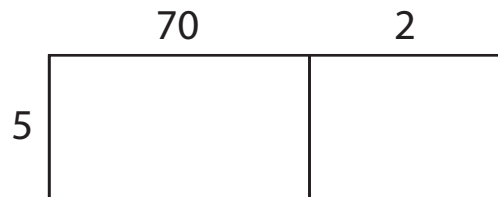
Sheet 1

A) Find the product in each problem using the area model.

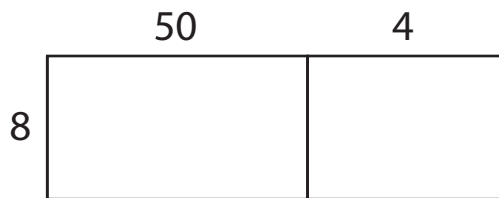
1)  $28 \times 6 =$  \_\_\_\_\_



2)  $72 \times 5 =$  \_\_\_\_\_

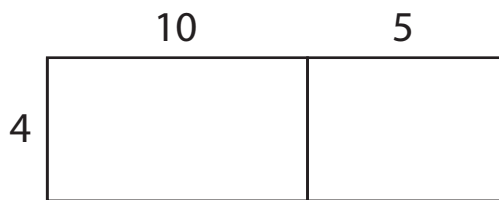


3) A box holds 54 packets of biscuits, and each packet contains 8 biscuits. How many biscuits are there in the box in total?



\_\_\_\_\_


4) There are 15 baskets, and each basket contains 4 peaches. How many peaches are there altogether?



\_\_\_\_\_

C) Use the area model and complete each multiplication sentence.

1)  $67 \times 9 =$  \_\_\_\_\_



2)  $33 \times 7 =$  \_\_\_\_\_

