


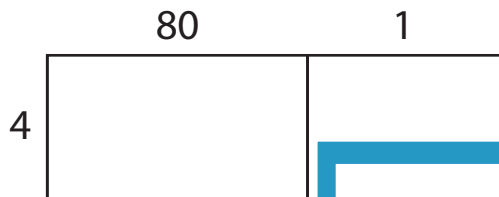
Name : _____

Area Model Multiplication

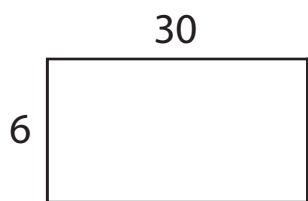
A) Find the product in each problem using the area model.

1) $81 \times 4 =$ _____

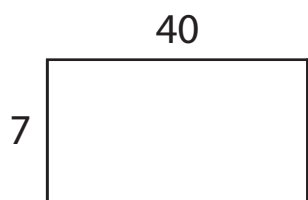
2) $97 \times 2 =$ _____



3) A restaurant order containing 6 eggs.
How many eggs are there in total?



4) A grocery store sells boxes containing 7 apples.
How many apples are there in total?



PREVIEW

Gain complete access to the largest collection of worksheets in all subjects!

Members, please log in to download this worksheet.

Not a member? Please sign up to gain complete access.

www.mathworksheets4kids.com

C) Use the area model and complete each multiplication sentence.

1) $78 \times 3 =$ _____

2) $50 \times 8 =$ _____

