


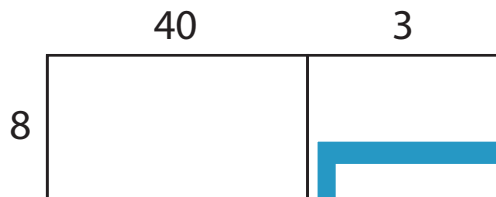
Name : \_\_\_\_\_

## Area Model Multiplication

A) Find the product in each problem using the area model.

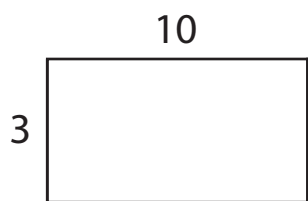
1)  $43 \times 8 =$  \_\_\_\_\_

2)  $59 \times 7 =$  \_\_\_\_\_



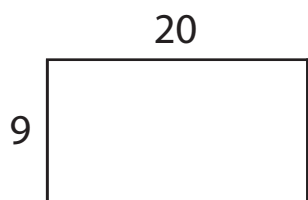
3) A box of chocolate pieces of chocolate

boxes. How many



4) A clothing store has shirts. How many shirts are there altogether

s. How many shirts



**PREVIEW**

Gain complete access to the largest collection of worksheets in all subjects!

Members, please log in to download this worksheet.

Not a member? Please sign up to gain complete access.

[www.mathworksheets4kids.com](http://www.mathworksheets4kids.com)

C) Use the area model and complete each multiplication sentence.

1)  $86 \times 2 =$  \_\_\_\_\_

2)  $94 \times 5 =$  \_\_\_\_\_

