

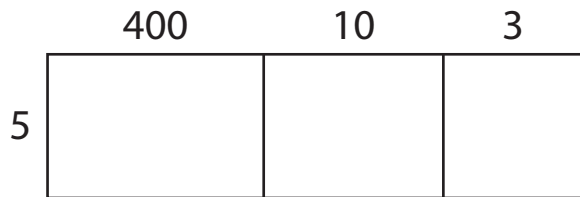
Name : _____

Area Model Multiplication

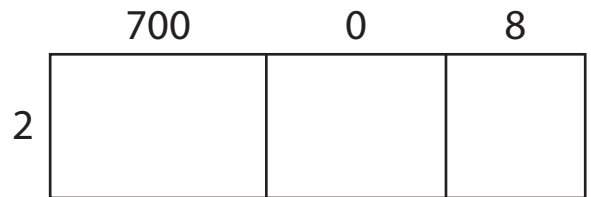
Sheet 1

A) Find the product in each problem using the area model.

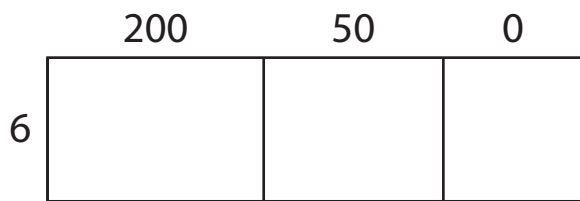
1) $413 \times 5 =$ _____



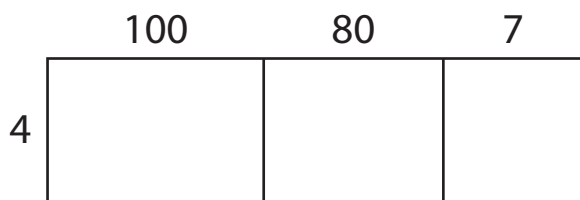
2) $708 \times 2 =$ _____



3) A movie theater sells 250 tickets per show. How many tickets will be sold after 6 shows?




4) A school library has 187 books on each shelf. How many books will there be on 4 shelves?



B) Use the area model and complete each multiplication sentence.

1) $521 \times 7 =$ _____



2) $394 \times 9 =$ _____

