

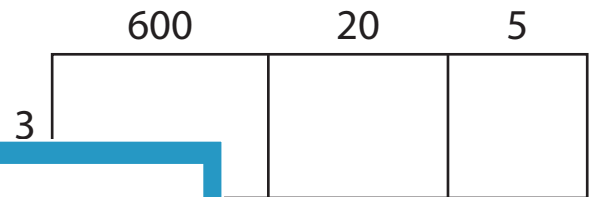
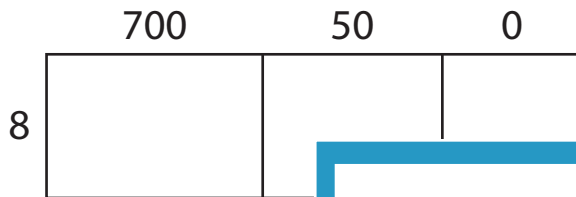
Name : _____

Area Model Multiplication


A) Find the product in each problem using the area model.

1) $750 \times 8 =$ _____


2) $625 \times 3 =$ _____



3) There are 100 pieces of candy in each bag. How many pieces of candy are there in 2 bags?



4) A factory produces 300 widgets every hour. How many widgets does the factory produce in 5 hours?



PREVIEW

Gain complete access to the largest collection of worksheets in all subjects!

Members, please log in to download this worksheet.

Not a member? Please sign up to gain complete access.

www.mathworksheets4kids.com

C) Use the area model and complete each multiplication sentence.

1) $472 \times 6 =$ _____

2) $816 \times 4 =$ _____

