

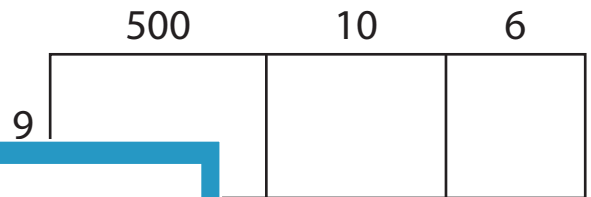
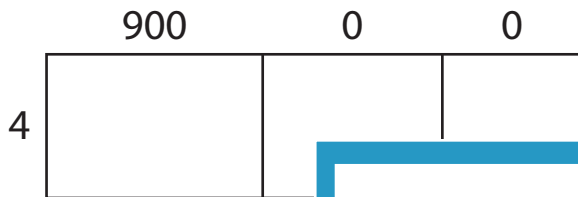
Name : _____

Area Model Multiplication


A) Find the product in each problem using the area model.

1) $900 \times 4 =$ _____

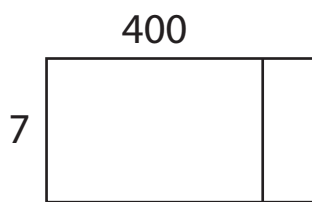
2) $516 \times 9 =$ _____



3) A bakery makes 300 cakes every day. How many cakes will they make in 3 days?



4) A truck delivers 400 boxes every day. How many boxes will the truck deliver in a week?



PREVIEW

Gain complete access to the largest collection of worksheets in all subjects!

Members, please log in to download this worksheet.

Not a member? Please sign up to gain complete access.

www.mathworksheets4kids.com

C) Use the area model and complete each multiplication sentence.

1) $227 \times 5 =$ _____

2) $683 \times 8 =$ _____

