

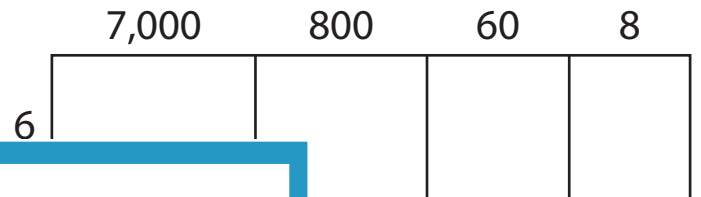
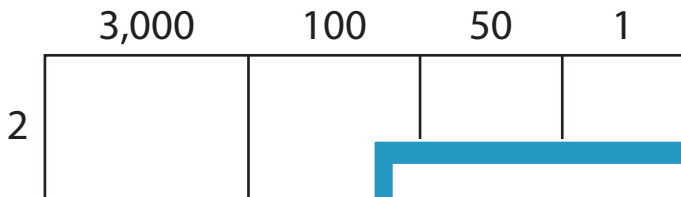
Name : _____

Area Model Multiplication


A) Find the product in each problem using the area model.

1) $3,151 \times 2 =$ _____


2) $7,868 \times 6 =$ _____



3) Silver Spoons restaurant sells 2,000 burgers and 300 fries every day. How many burgers did they sell in seven days. How many fries did they sell in seven days?



4) Whimsy Workshop sells 1,000 toy cars and 900 toy trucks every day. If each toy car has three color options and each toy truck has two color options, how many color options do they have in total?



PREVIEW

Gain complete access to the largest collection of worksheets in all subjects!

Members, please log in to download this worksheet.

Not a member? Please sign up to gain complete access.

www.mathworksheets4kids.com

B) Use the area model and complete each multiplication sentence.

1) $4,576 \times 4 =$ _____

2) $9,072 \times 9 =$ _____

