

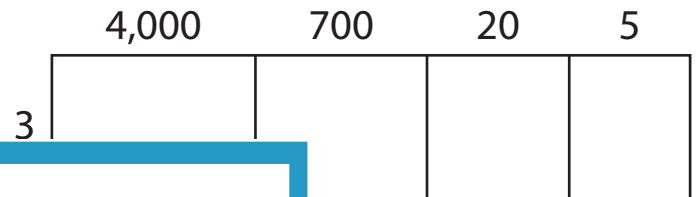
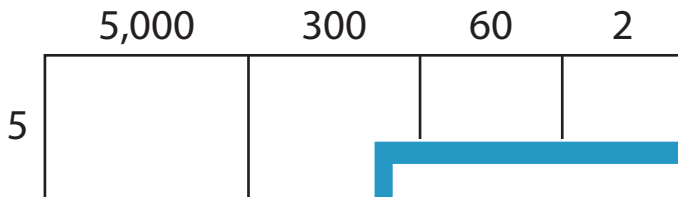
Name : \_\_\_\_\_

## Area Model Multiplication


A) Find the product in each problem using the area model.

1)  $5,362 \times 5 =$  \_\_\_\_\_


2)  $4,725 \times 3 =$  \_\_\_\_\_



3) The Bright Minds  
How much did th



4) Curiosity Cove re  
six experiments, l



# PREVIEW

Gain complete access to the largest  
collection of worksheets in all subjects!

Members, please  
log in to  
download this  
worksheet.

Not a member?  
Please sign up to  
gain complete  
access.

[www.mathworksheets4kids.com](http://www.mathworksheets4kids.com)

ing subscriptions.  
s \$4?

each kit contains  
all?

C) Use the area model and complete each multiplication sentence.

1)  $3,423 \times 8 =$  \_\_\_\_\_

2)  $8,917 \times 2 =$  \_\_\_\_\_

