

Name: \_\_\_\_\_

# Area Model Multiplication

**Key**  
★ = 100  
★ = 10  
★ = 1

Find the product using the value of each star given in the key.

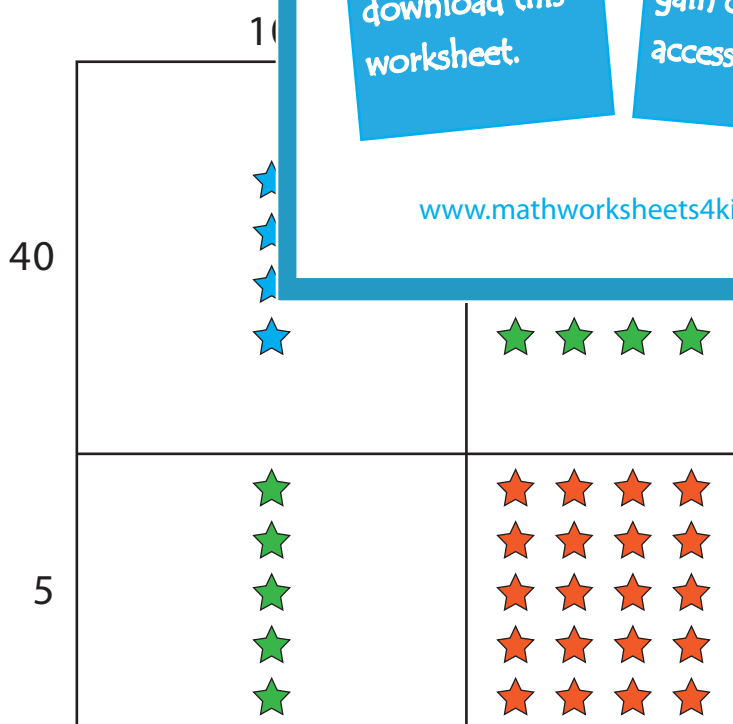
1)  $33 \times 3 =$  \_\_\_\_\_



2)  $211 \times 5 =$  \_\_\_\_\_



3)  $14 \times 45 =$  \_\_\_\_\_



**PREVIEW**

Gain complete access to the largest collection of worksheets in all subjects!

Members, please log in to download this worksheet.

Not a member? Please sign up to gain complete access.

[www.mathworksheets4kids.com](http://www.mathworksheets4kids.com)

**Area Model Multiplication**



**Key**  
 ★ = 100  
 ★ = 10  
 ★ = 1

Find the product using the value of each star given in the key.

1)  $33 \times 3 =$            **99**          



2)  $211 \times 5 =$  \_\_\_\_\_



3)  $14 \times 45 =$  \_\_\_\_\_



# PREVIEW

Gain complete access to the largest collection of worksheets in all subjects!

Members, please log in to download this worksheet.

Not a member? Please sign up to gain complete access.

[www.mathworksheets4kids.com](http://www.mathworksheets4kids.com)