
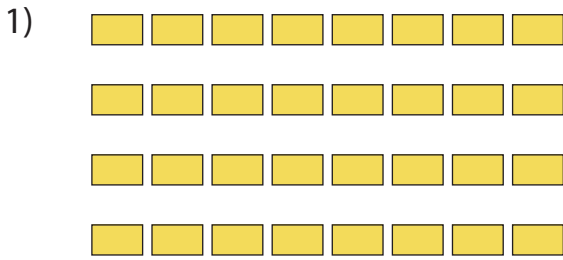


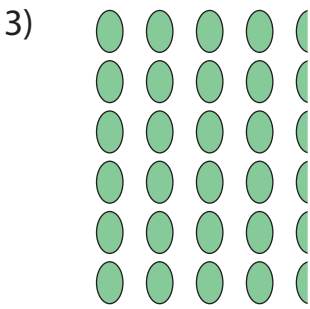
Completing Multiplication Equations

Complete the multiplication equation that describes each array.



× 8

7 = 14



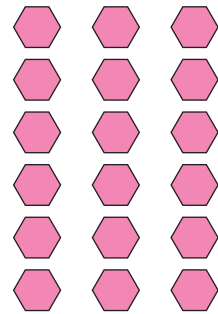
PREVIEW

Gain complete access to the largest collection of worksheets in all subjects!

Members, please log in to download this worksheet.



Not a member? Please sign up to gain complete access.

www.mathworksheets4kids.com




6 ×

= 30



× 4 = 20





3 × = 33

× 8 = 96

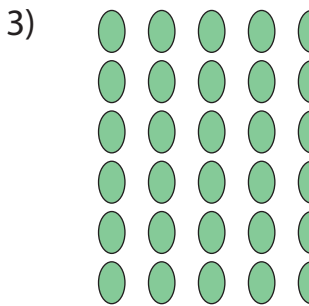
Completing Multiplication Equations

Complete the multiplication equation that describes each array.



$\boxed{4} \times 8$

$7 = 14$




PREVIEW

Gain complete access to the largest collection of worksheets in all subjects!

Members, please log in to download this worksheet.



Not a member? Please sign up to gain complete access.

www.mathworksheets4kids.com




$6 \times \boxed{9}$

$\boxed{5} = 30$



$\boxed{5} \times 4 = 20$



$3 \times \boxed{11} = 33$

$\boxed{12} \times 8 = 96$