

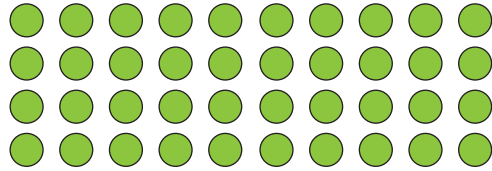
Name : _____

Drawing Arrays

Sheet 1

Example:

$$4 \times 10 = \underline{40}$$



Draw an array to find the answer to each multiplication sentence.

1) $3 \times 5 =$ _____

PREVIEW

Gain complete access to the largest
collection of worksheets in all subjects!

Members, please
log in to
download this
worksheet.

Not a member?
Please sign up to
gain complete
access.

www.mathworksheets4kids.com

3) $10 \times 2 =$ _____

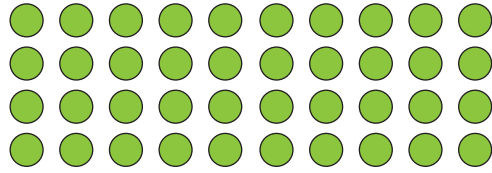
5) $5 \times 4 =$ _____

6) $3 \times 11 =$ _____

Drawing Arrays

Example:

$4 \times 10 = \underline{40}$




Draw an array to find the answer to each multiplication sentence.
(Drawings may vary.)


1) $3 \times 5 = \underline{15}$




3) $10 \times 2 = \underline{20}$



5) $5 \times 4 = \underline{20}$



6) $3 \times 11 = \underline{33}$



PREVIEW

Gain complete access to the largest collection of worksheets in all subjects!

Members, please log in to download this worksheet.

Not a member? Please sign up to gain complete access.

www.mathworksheets4kids.com