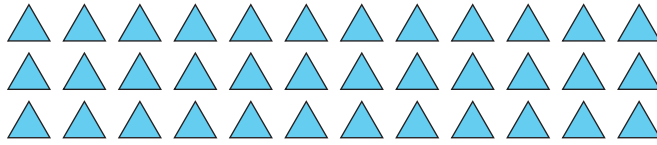


Drawing Arrays

Sheet 2

Example:

$3 \times 12 = \underline{36}$



Draw an array to find the answer to each multiplication sentence.

1) $7 \times 7 =$ _____

PREVIEWGain complete access to the largest
collection of worksheets in all subjects!

3) $3 \times 8 =$ _____

Members, please
log in to
download this
worksheet.Not a member?
Please sign up to
gain complete
access.www.mathworksheets4kids.com

5) $2 \times 6 =$ _____

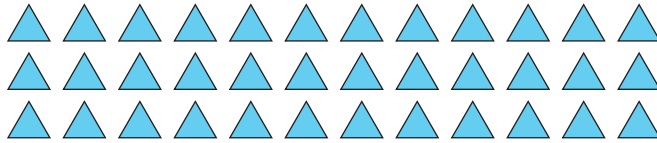
6) $5 \times 10 =$ _____

Drawing Arrays

Sheet 2

Example:


$3 \times 12 = \underline{36}$



Draw an array to find the answer to each multiplication sentence.

(Drawings may vary)

1) $7 \times 7 = \underline{49}$

**8****PREVIEW**



Gain complete access to the largest collection of worksheets in all subjects!

Members, please log in to download this worksheet.


Not a member? Please sign up to gain complete access.

www.mathworksheets4kids.com

3) $3 \times 8 = \underline{24}$

**30**

5) $2 \times 6 = \underline{12}$



6) $5 \times 10 = \underline{50}$

