


Name : _____

Drawing Arrays

Sheet 4

Example:

$$3 \times 10 = \underline{30}$$



Draw an array to find the answer to each multiplication sentence.

1) $2 \times 7 =$ _____

PREVIEW

Gain complete access to the largest
collection of worksheets in all subjects!

3) $4 \times 9 =$ _____

Members, please
log in to
download this
worksheet.

Not a member?
Please sign up to
gain complete
access.

www.mathworksheets4kids.com


5) $2 \times 12 =$ _____

6) $6 \times 11 =$ _____

Drawing Arrays

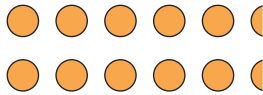
Example:

$3 \times 10 = \underline{30}$




Draw an array to find the answer to each multiplication sentence.
(Drawings may vary.)


1) $2 \times 7 = \underline{14}$



$5 \times 10 = \underline{50}$



3) $4 \times 9 = \underline{36}$



$6 \times 11 = \underline{66}$

PREVIEW

Gain complete access to the largest collection of worksheets in all subjects!

Members, please log in to download this worksheet.

Not a member? Please sign up to gain complete access.

www.mathworksheets4kids.com

5) $2 \times 12 = \underline{24}$



6) $6 \times 11 = \underline{66}$

