


Name : \_\_\_\_\_

## Drawing Arrays

Sheet 5

Example:

$$4 \times 12 = \underline{48}$$



Draw an array to find the answer to each multiplication sentence.

1)  $5 \times 8 =$  \_\_\_\_\_

# PREVIEW

Gain complete access to the largest  
collection of worksheets in all subjects!

3)  $7 \times 11 =$  \_\_\_\_\_

Members, please  
log in to  
download this  
worksheet.

Not a member?  
Please sign up to  
gain complete  
access.

[www.mathworksheets4kids.com](http://www.mathworksheets4kids.com)


5)  $8 \times 9 =$  \_\_\_\_\_

6)  $4 \times 5 =$  \_\_\_\_\_

**Drawing Arrays**


Example:

$4 \times 12 = \underline{48}$




Draw an array to find the answer to each multiplication sentence.  
(Drawings may vary.)

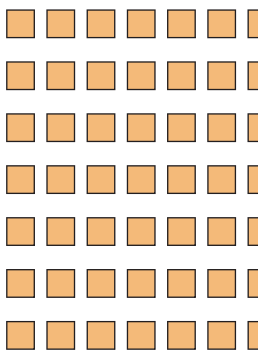
1)  $5 \times 8 = \underline{40}$




5) \_\_\_\_\_




3)  $7 \times 11 = \underline{77}$




5) \_\_\_\_\_



5)  $8 \times 9 = \underline{72}$



6)  $4 \times 5 = \underline{20}$



**PREVIEW**

Gain complete access to the largest collection of worksheets in all subjects!

Members, please log in to download this worksheet.

Not a member? Please sign up to gain complete access.

[www.mathworksheets4kids.com](http://www.mathworksheets4kids.com)