


Describing Model: Equal Groups

Answer the questions that describe each model.



1) How many fish

2) How many fish

3) Write a multipli

_____ × _____

4) How many fish

B)



1) How many plates are there?

_____ plates

2) How many cups are there in each plate?

_____ cups

3) Write a multiplication sentence that describes the model.

_____ × _____ = _____

4) How many cups are there in all?

_____ cups

PREVIEW

Gain complete access to the largest collection of worksheets in all subjects!

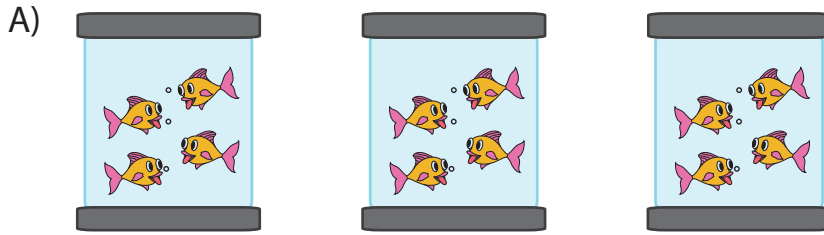
Members, please log in to download this worksheet.

Not a member? Please sign up to gain complete access.

www.mathworksheets4kids.com

Describing Model: Equal Groups

Answer the questions that describe each model.



1) How many fish

 3

2) How many fish

 4


3) Write a multipli

 3 ×

4) How many fish

 12

B)



1) How many plates are there?

 3 plates

2) How many cups are there in each plate?

 5 cups

3) Write a multiplication sentence that describes the model.

 3 × 5 = 15

4) How many cups are there in all?

 15 cups

PREVIEW

Gain complete access to the largest
collection of worksheets in all subjects!

Members, please
log in to
download this
worksheet.

Not a member?
Please sign up to
gain complete
access.

www.mathworksheets4kids.com