

Equal Groups: Multiplication Sentence


Complete the multiplication equation that describes each model.

1)



$$\square \times 3 = 9$$

2)



2

PREVIEW


Gain complete access to the largest
collection of worksheets in all subjects!

Members, please
log in to
download this
worksheet.

Not a member?
Please sign up to
gain complete
access.

www.mathworksheets4kids.com

3)




$$\square$$

4)



$$5 \times \square = 10$$

5)



$$\square \times 2 = 8$$

Equal Groups: Multiplication Sentence


Complete the multiplication equation that describes each model.

1)



$$\boxed{3} \times 3 = 9$$

2)



2

PREVIEW


Gain complete access to the largest collection of worksheets in all subjects!

Members, please log in to download this worksheet.

Not a member? Please sign up to gain complete access.

www.mathworksheets4kids.com

3)




4

4)



$$5 \times \boxed{2} = 10$$

5)



$$\boxed{4} \times 2 = 8$$