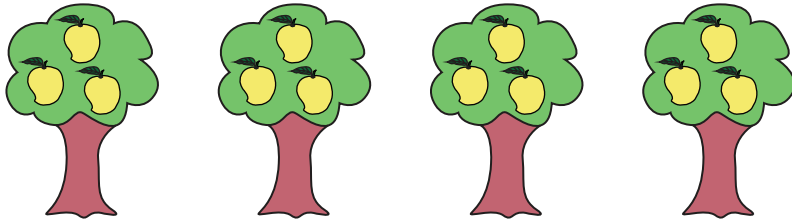


## Equal Groups: Multiplication Sentence


Complete the multiplication equation that describes each model.

1)




4

2)




3)



5

4)



$$\square \times 3 = 6$$

5)



$$5 \times \square = 20$$

# PREVIEW

Gain complete access to the largest collection of worksheets in all subjects!

Members, please log in to download this worksheet.

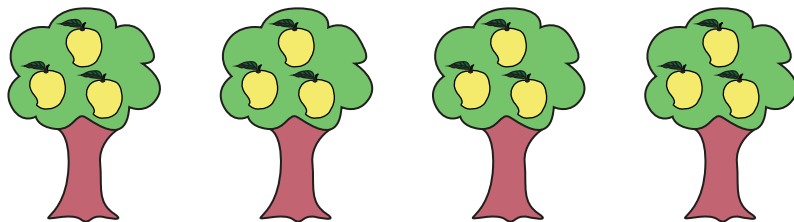
Not a member? Please sign up to gain complete access.

[www.mathworksheets4kids.com](http://www.mathworksheets4kids.com)

## Equal Groups: Multiplication Sentence

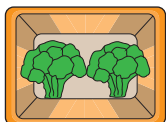
Complete the multiplication equation that describes each model.

1)




4

2)




2

3)



5

4)



2

$$\times 3 = 6$$

5)



5

4

$$= 20$$

# PREVIEW

Gain complete access to the largest collection of worksheets in all subjects!

Members, please log in to download this worksheet.

Not a member? Please sign up to gain complete access.

[www.mathworksheets4kids.com](http://www.mathworksheets4kids.com)