

Equal Groups: Multiplication Sentence

A) Identify the multiplication sentence that describes each model.

1)



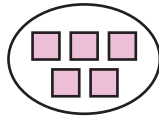
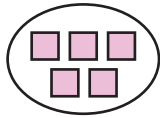
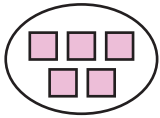
a) 4×4

b) 1×4

c) 4×3

d) 2×4

2)



a) 2×5

3)



a) 1×3

4)



a) 2×2

B) Draw equal groups

and write the multiplication sentence.

1) $2 \times 4 =$ _____



2) $3 \times 2 =$ _____



PREVIEW

Gain complete access to the largest collection of worksheets in all subjects!


Members, please log in to download this worksheet.

Not a member? Please sign up to gain complete access.

www.mathworksheets4kids.com

Equal Groups: Multiplication Sentence

A) Identify the multiplication sentence that describes each model.

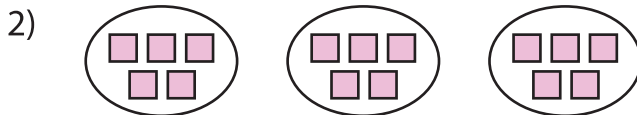


~~a) 4×4~~

b) 1×4

c) 4×3

d) 2×4



a) 2×5



a) 1×3

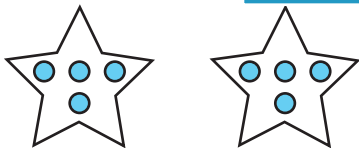


a) 2×2

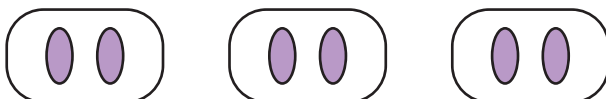
B) Draw equal groups
(Drawings may

...cation sentence.

1) $2 \times 4 = \underline{8}$



2) $3 \times 2 = \underline{6}$



PREVIEW

Gain complete access to the largest
collection of worksheets in all subjects!

Members, please
log in to
download this
worksheet.

Not a member?
Please sign up to
gain complete
access.

www.mathworksheets4kids.com