

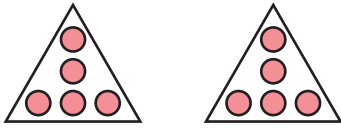
Name : _____

Equal Groups: Multiplication Sentence

Identify-L1S2

A) Identify the multiplication sentence that describes each model.

1)



a) 1×5

b) 2×5

c) 5×4

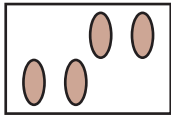
d) 5×5

2)




a) 4×4

3)



a) 2×3

4)



a) 4×3


B) Draw equal groups

and write the multiplication sentence.

1) $5 \times 3 =$ _____



2) $3 \times 3 =$ _____



PREVIEW

Gain complete access to the largest collection of worksheets in all subjects!

Members, please log in to download this worksheet.

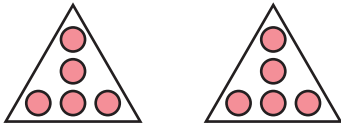
Not a member? Please sign up to gain complete access.

www.mathworksheets4kids.com

Equal Groups: Multiplication Sentence

A) Identify the multiplication sentence that describes each model.

1)



a) 1×5

~~b) 2×5~~

c) 5×4

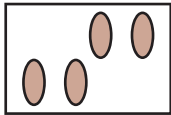
d) 5×5

2)




a) 4×4

3)



a) 2×3

4)



~~a) 4×3~~

PREVIEW

Gain complete access to the largest collection of worksheets in all subjects!

Members, please log in to download this worksheet.

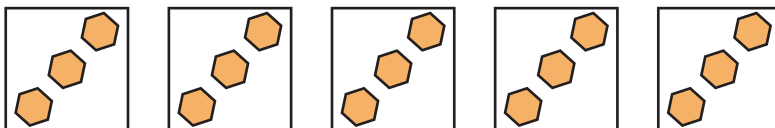
Not a member? Please sign up to gain complete access.

www.mathworksheets4kids.com

B) Draw equal groups
(Drawings may

multiplication sentence.

1) $5 \times 3 = \underline{15}$



2) $3 \times 3 = \underline{9}$

