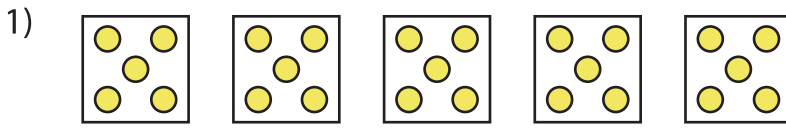


Name : \_\_\_\_\_

## Equal Groups: Multiplication Sentence

Identify-L1S4

A) Identify the multiplication sentence that describes each model.



- a)  $4 \times 5$       b)  $5 \times 1$       c)  $3 \times 5$       d)  $5 \times 5$



- a)  $2 \times 4$



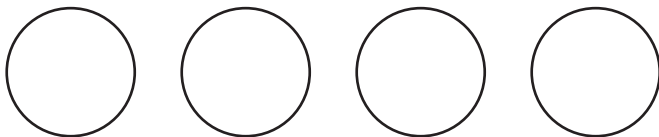
- a)  $5 \times 5$



- a)  $3 \times 2$

B) Draw equal groups \_\_\_\_\_ multiplication sentence.

1)  $4 \times 3 =$  \_\_\_\_\_



2)  $2 \times 2 =$  \_\_\_\_\_



# PREVIEW

Gain complete access to the largest  
collection of worksheets in all subjects!

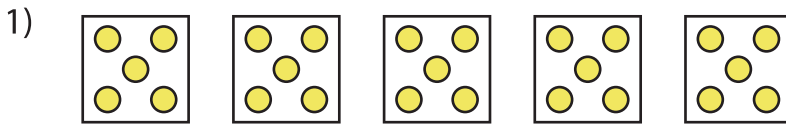
Members, please  
log in to  
download this  
worksheet.

Not a member?  
Please sign up to  
gain complete  
access.

[www.mathworksheets4kids.com](http://www.mathworksheets4kids.com)

**Equal Groups: Multiplication Sentence**

A) Identify the multiplication sentence that describes each model.



a)  $4 \times 5$

b)  $5 \times 1$

c)  $3 \times 5$

~~d)  $5 \times 5$~~



~~a)  $2 \times 4$~~



a)  $5 \times 5$

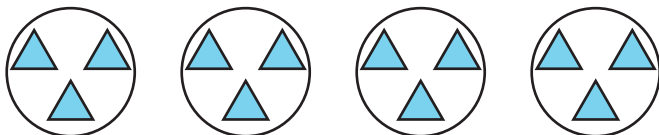


a)  $3 \times 2$

B) Draw equal groups  
(Drawings may

multiplication sentence.

1)  $4 \times 3 = \underline{12}$



2)  $2 \times 2 = \underline{4}$



# PREVIEW

Gain complete access to the largest  
collection of worksheets in all subjects!

Members, please  
log in to  
download this  
worksheet.

Not a member?  
Please sign up to  
gain complete  
access.

[www.mathworksheets4kids.com](http://www.mathworksheets4kids.com)