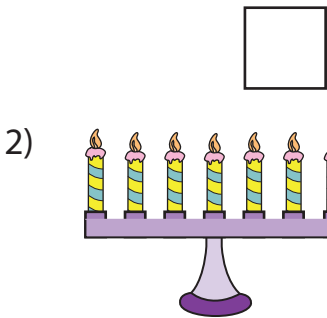
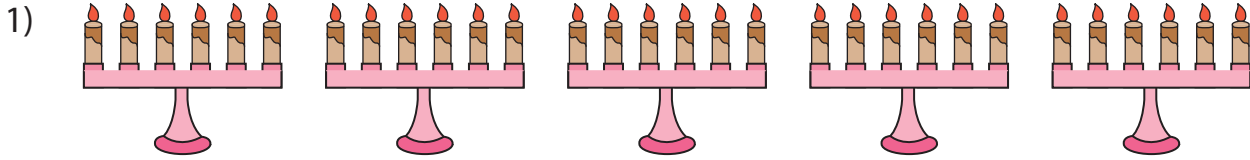
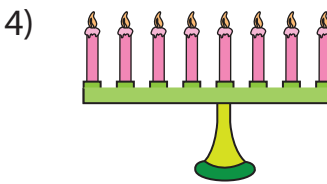


Equal Groups: Multiplication Sentence

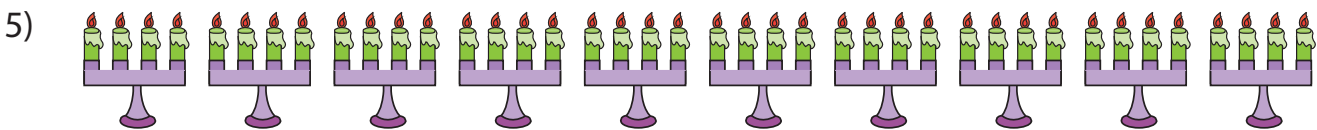
Complete the multiplication equation that describes each model.



2 ×



4 × = 36



× 4 = 40

PREVIEW

Gain complete access to the largest
collection of worksheets in all subjects!

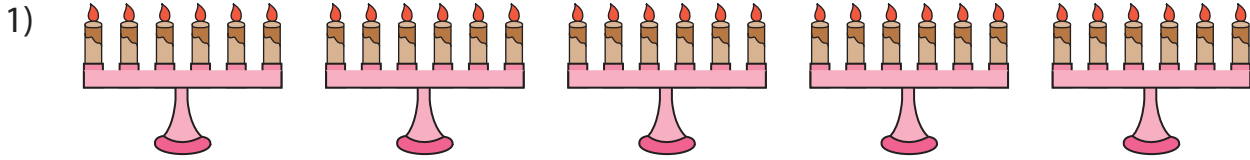
Members, please
log in to
download this
worksheet.

Not a member?
Please sign up to
gain complete
access.

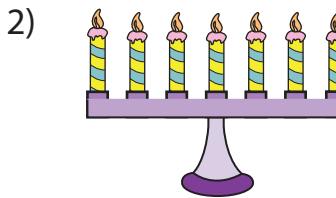
www.mathworksheets4kids.com

Equal Groups: Multiplication Sentence

Complete the multiplication equation that describes each model.



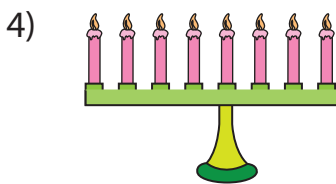
5



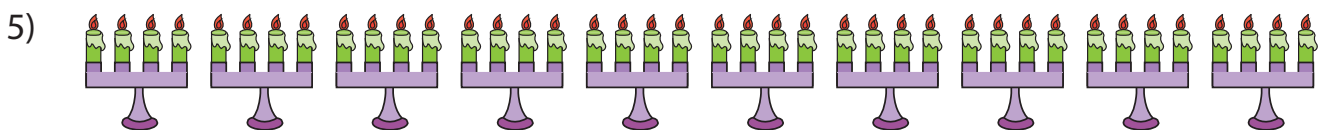
2 ×



8



4 × 9 = 36



10 × 4 = 40

PREVIEW

Gain complete access to the largest
collection of worksheets in all subjects!

Members, please
log in to
download this
worksheet.

Not a member?
Please sign up to
gain complete
access.

www.mathworksheets4kids.com