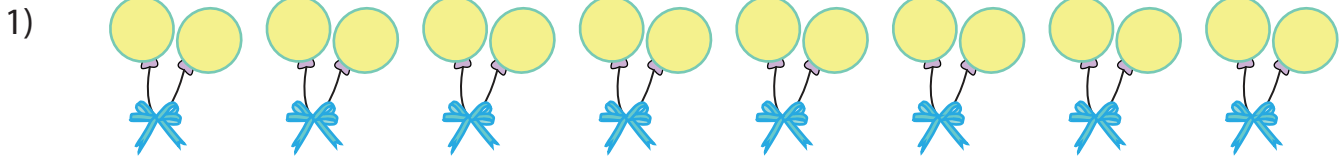



Equal Groups: Multiplication Sentence

Complete the multiplication equation that describes each model.



$$8 \times \square = 16$$




PREVIEW
Gain complete access to the largest collection of worksheets in all subjects!




Members, please log in to download this worksheet.

Not a member? Please sign up to gain complete access.




$$6 \times \square = 30$$




$$\times 3 = 21$$

Equal Groups: Multiplication Sentence

Complete the multiplication equation that describes each model.



$$8 \times \boxed{2} = 16$$



$$\boxed{2}$$

PREVIEW

Gain complete access to the largest collection of worksheets in all subjects!


Members, please log in to download this worksheet.

Not a member? Please sign up to gain complete access.


www.mathworksheets4kids.com



$$\boxed{8}$$



$$6 \times \boxed{5} = 30$$



$$\boxed{7} \times 3 = 21$$