


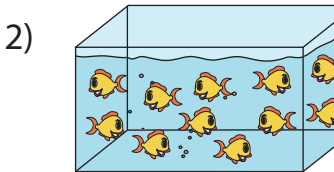
Name : _____

Equal Groups: Multiplication Sentence

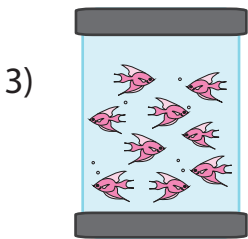
Complete the multiplication equation that describes each model.



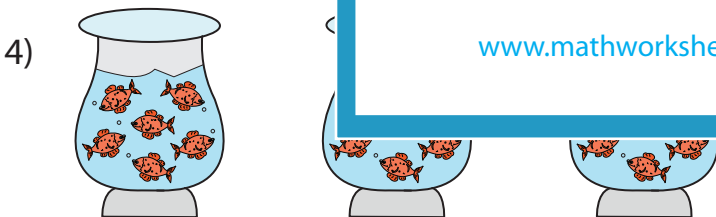
$\times 8 = 24$



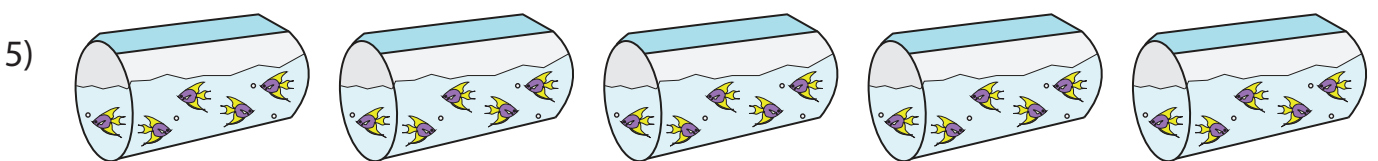
2 \times



5 \times



$\times 6 = 18$



5 \times = 25

PREVIEW

Gain complete access to the largest collection of worksheets in all subjects!


Members, please log in to download this worksheet.

Not a member? Please sign up to gain complete access.

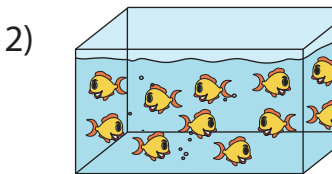
www.mathworksheets4kids.com

Equal Groups: Multiplication Sentence

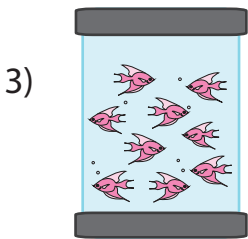
Complete the multiplication equation that describes each model.



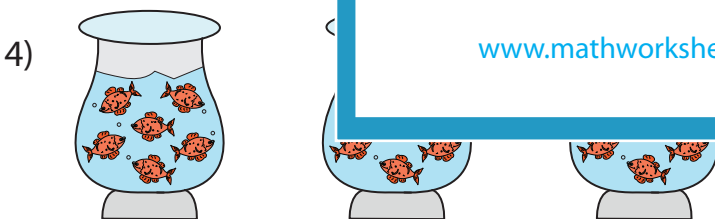
$$\boxed{3} \times 8 = 24$$



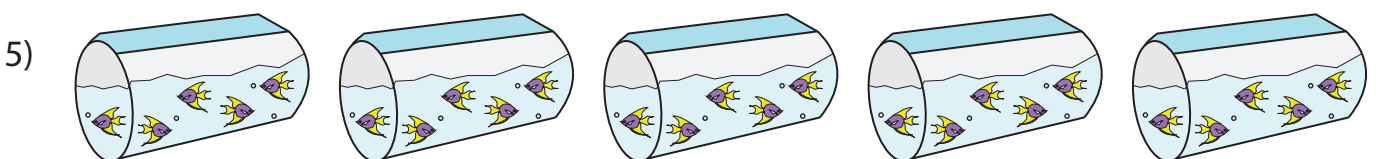
2



5



$$\boxed{3} \times 6 = 18$$



$$5 \times \boxed{5} = 25$$

PREVIEW

Gain complete access to the largest
collection of worksheets in all subjects!

Members, please
log in to
download this
worksheet.

Not a member?
Please sign up to
gain complete
access.

www.mathworksheets4kids.com